

Location Entry Codes

As part of CIE's continual commitment to maintaining best practice in assessment, CIE uses different variants of some question papers for our most popular assessments with large and widespread candidature. The question papers are closely related and the relationships between them have been thoroughly established using our assessment expertise. All versions of the paper give assessment of equal standard.

The content assessed by the examination papers and the type of questions is unchanged.

This change means that for this component there are now two variant Question Papers, Mark Schemes and Principal Examiner's Reports where previously there was only one. For any individual country, it is intended that only one variant is used. This document contains both variants which will give all Centres access to even more past examination material than is usually the case.

The diagram shows the relationship between the Question Papers, Mark Schemes and Principal Examiners' Reports that are available.

Question Paper	Mark Scheme	Principal Examiner's Report
Introduction	Introduction	Introduction
First variant Question Paper	First variant Mark Scheme	First variant Principal Examiner's Report
Second variant Question Paper	Second variant Mark Scheme	Second variant Principal Examiner's Report

Who can I contact for further information on these changes?

Please direct any questions about this to CIE's Customer Services team at:

international@cie.org.uk

The titles for the variant items should correspond with the table above, so that at the top of the first page of the relevant part of the document and on the header, it has the words:

- First variant Question Paper / Mark Scheme / Principal Examiner's Report

or

- Second variant Question Paper / Mark Scheme / Principal Examiner's Report

as appropriate.



UNIVERSITY OF CAMBRIDGE INTERNATIONAL EXAMINATIONS
International General Certificate of Secondary Education

CANDIDATE
NAME

CENTRE
NUMBER

--	--	--	--	--

CANDIDATE
NUMBER

--	--	--	--	--

* 5 8 6 2 6 0 0 3 5 0 *

MATHEMATICS

0580/11, 0581/11

Paper 1 (Core)

May/June 2009

1 hour

Candidates answer on the Question Paper.

Additional Materials:

Electronic Calculator
Geometrical Instruments

Mathematical tables (optional)
Tracing paper (optional)

READ THESE INSTRUCTIONS FIRST

Write your Centre number, candidate number and name on all the work you hand in.

Write in dark blue or black pen.

You may use a pencil for any diagrams or graphs.

Do not use staples, paper clips, highlighters, glue or correction fluid.

DO NOT WRITE IN ANY BARCODES.

Answer **all** questions.

If working is needed for any question it must be shown below that question.

Electronic calculators should be used.

If the degree of accuracy is not specified in the question, and if the answer is not exact, give the answer to three significant figures. Give answers in degrees to one decimal place.

For π , use either your calculator value or 3.142.

At the end of the examination, fasten all your work securely together.

The number of marks is given in brackets [] at the end of each question or part question.

The total of the marks for this paper is 56.

This document consists of **11** printed pages and **1** blank page.



1 \geq $<$ $>$ $=$ \leq

Choose one of the above symbols to make a correct statement in the answer space.

For
Examiner's
Use

Answer 0.4 $\frac{4}{9}$ [1]

2 (a) Calculate $\frac{0.0763}{1.85 + 4.7 \times 8}$.

Answer(a) [1]

(b) Write 0.0763 in standard form.

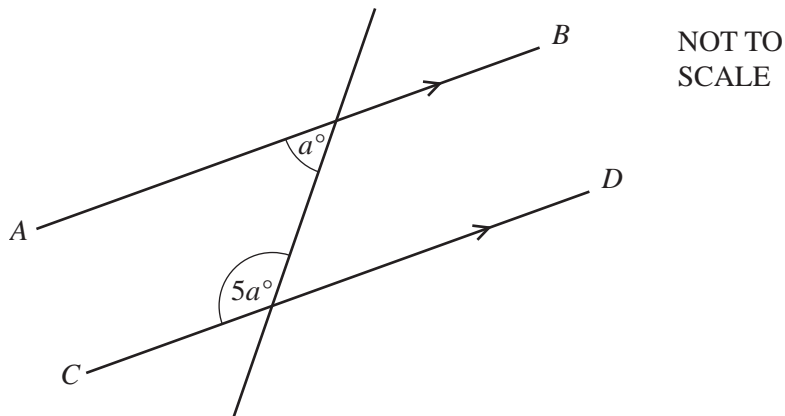
Answer(b) [1]

3 How many glasses, each holding 200 cm^3 , can be filled completely from a full 4.5 litre bottle of water?

Answer [2]

- 4 In the diagram AB is parallel to CD .

Calculate the value of a .



Answer $a =$ [2]

- 5 Hakim and Bashira measure their heights.
Hakim's height is 157 cm and Bashira's height is 163 cm, both correct to the nearest centimetre.

Find the greatest possible difference between their heights.

Answer cm [2]

- 6 (a) Write down the gradient of the line $y = 3x - 4$.

Answer(a) [1]

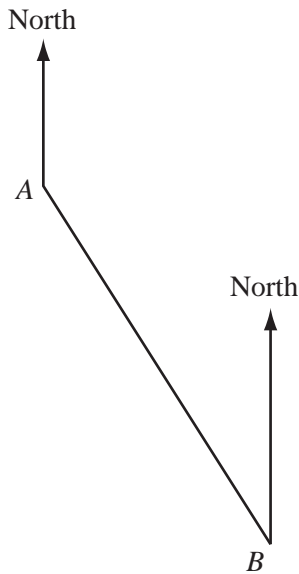
- (b) Write down the equation of a line through $(0, 0)$ parallel to $y = 3x - 4$.

Answer(b) [1]

7 A and B are two points marked on a map.

By measuring a suitable angle, find the bearing of A from B .

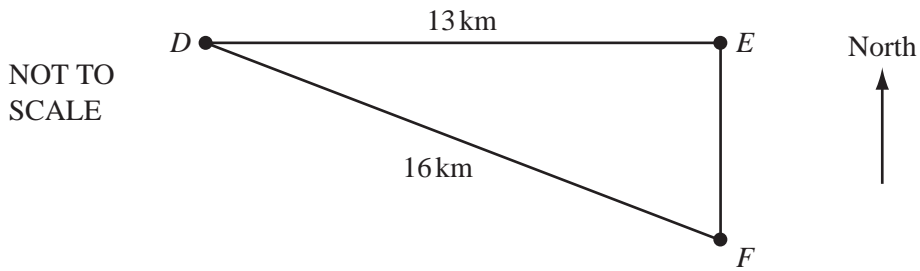
*For
Examiner's
Use*



Answer [2]

8 Town E is 13 kilometres due east of D .
Town F is due south of E , and $DF = 16$ kilometres.

Calculate the distance from E to F .



Answer km [2]

- 9 In 2007 Klaus paid 350 euros (€) for a flight from Berlin to Nairobi.

The return flight from Nairobi to Berlin cost him 30 700 Kenyan Shillings (KES).

The exchange rate at the time of the return flight was €1 = 79.6 KES.

Calculate the difference, in euros, between the costs of the two flights.
Give your answer correct to 2 decimal places.

Answer € [2]

- 10 (a) Expand and simplify $5(3c - 4d) - 8c$.

Answer(a) [2]

- (b) Factorise $pq - q^2$.

Answer(b) [1]

- 11 (a) Find the lowest common multiple of 7 and 9.

Answer(a) [1]

- (b) Without using a calculator, work out $\frac{8}{9} - \frac{5}{7}$, leaving your answer as a fraction.
You must show all your working.

Answer(b) [2]

12

$$z = 2x - y$$

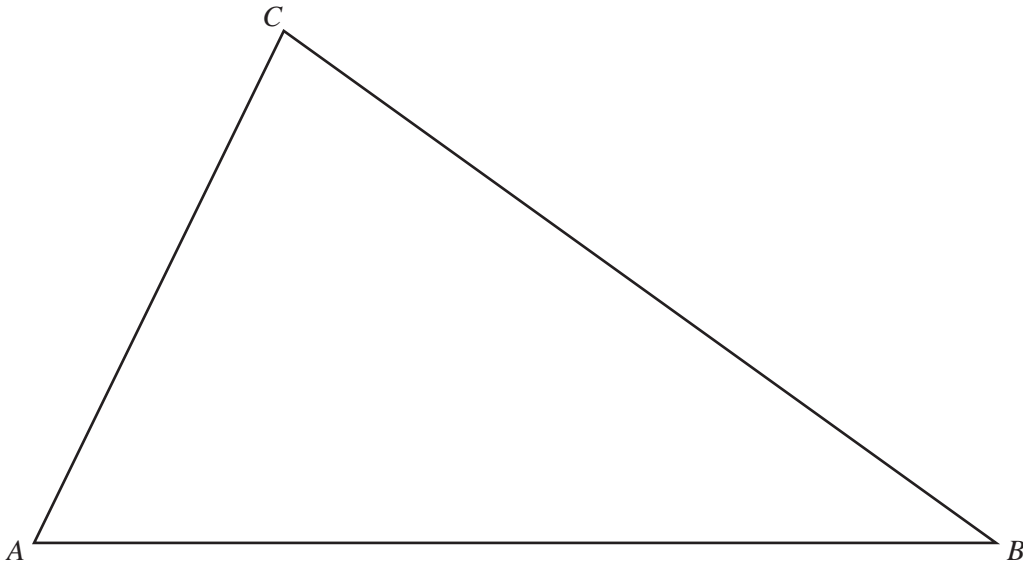
- (a) Find z when $x = -3$ and $y = 7$.

Answer(a) $z =$ [1]

- (b) Make x the subject of the formula.

Answer(b) $x =$ [2]

- 13 The diagram shows an accurate drawing of a triangular field.
1 centimetre represents 15 metres.
Florentina walks along a straight path from A to the side BC .
The path is always the same distance from AB and AC .



- (a) **Using a straight edge and compasses only**, construct the line of the path.
You must show your construction arcs clearly. [2]
- (b) The path meets BC at D .
How far, in metres, is Florentina from B when she reaches D ?

Answer(b) m [1]

For
Examiner's
Use

14 x is an integer between 60 and 90.

Write down the value of x when it is

(a) an odd square number,

Answer(a) $x =$ [1]

(b) 4^3 ,

Answer(b) $x =$ [1]

(c) a multiple of 29,

Answer(c) $x =$ [1]

(d) a prime factor of 146.

Answer(d) $x =$ [1]

15 Simplify

(a) $3p \times 5p^3$,

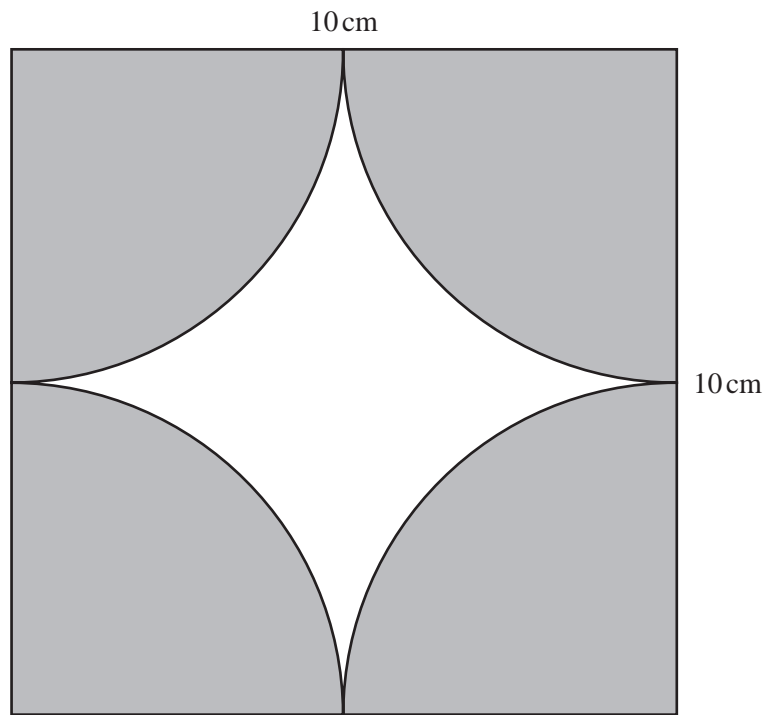
Answer(a) [2]

(b) $24q^2 \div 8q^{-3}$.

Answer(b) [2]

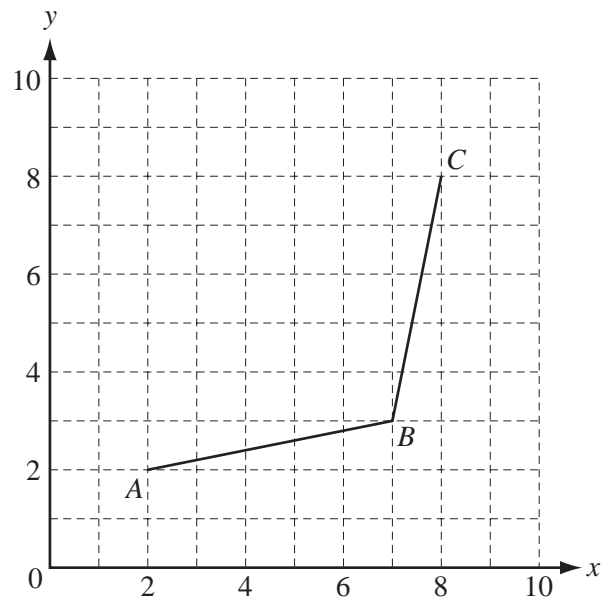
- 16 The diagram shows a square tile of side 10 centimetres with 4 identical quarter circles shaded.

*For
Examiner's
Use*



Calculate the area of the **unshaded** region.

Answer cm^2 [4]



Points A , B and C are shown on the grid.

(a) Plot the point D on the grid above so that $ABCD$ is a rhombus. [1]

(b) Write \vec{BD} as a column vector.

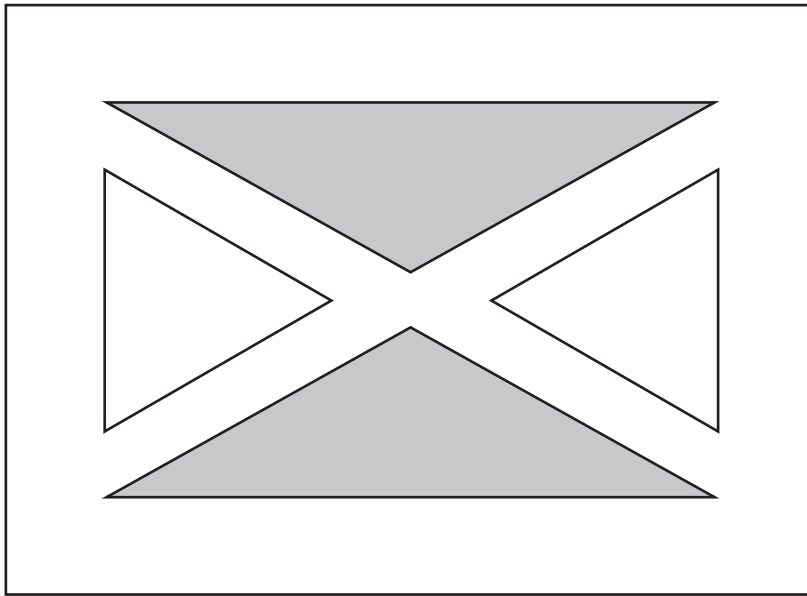
Answer(b) $\vec{BD} = \begin{pmatrix} \\ \end{pmatrix}$ [2]

(c) M is the mid-point of AC .
Write \vec{AM} as a column vector.

Answer(c) $\vec{AM} = \begin{pmatrix} \\ \end{pmatrix}$ [1]

18 The plan of a rectangular garden with 4 triangular flowerbeds is shown in the diagram.

For
Examiner's
Use



(a) Write down the name of the special triangles that are

(i) shaded,

Answer(a)(i) [1]

(ii) unshaded.

Answer(a)(ii) [1]

(b) State the order of rotational symmetry of the plan.

Answer(b) [1]

(c) Draw the lines of symmetry on the plan. [2]

19 A school has 350 students.

(a) On the school sports day 96% of the students were present.

Calculate how many students were **absent**.

Answer(a) [2]

(b) The table shows the number of students attending school in one week.

Monday	Tuesday	Wednesday	Thursday	Friday
334	329	348	341	323

For these values,

(i) calculate the mean,

Answer(b)(i) [2]

(ii) find the median,

Answer(b)(ii) [1]

(iii) find the range.

Answer(b)(iii) [1]

*For
Examiner's
Use*

BLANK PAGE

Permission to reproduce items where third-party owned material protected by copyright is included has been sought and cleared where possible. Every reasonable effort has been made by the publisher (UCLES) to trace copyright holders, but if any items requiring clearance have unwittingly been included, the publisher will be pleased to make amends at the earliest possible opportunity.

University of Cambridge International Examinations is part of the Cambridge Assessment Group. Cambridge Assessment is the brand name of University of Cambridge Local Examinations Syndicate (UCLES), which is itself a department of the University of Cambridge.



UNIVERSITY OF CAMBRIDGE INTERNATIONAL EXAMINATIONS
International General Certificate of Secondary Education

CANDIDATE
NAME

CENTRE
NUMBER

--	--	--	--	--

CANDIDATE
NUMBER

--	--	--	--	--

* 4 6 0 8 3 7 4 4 3 0 *

MATHEMATICS

0580/12, 0581/12

Paper 1 (Core)

May/June 2009

1 hour

Candidates answer on the Question Paper.

Additional Materials:

Electronic Calculator
Geometrical Instruments

Mathematical tables (optional)
Tracing paper (optional)

READ THESE INSTRUCTIONS FIRST

Write your Centre number, candidate number and name on all the work you hand in.

Write in dark blue or black pen.

You may use a pencil for any diagrams or graphs.

Do not use staples, paper clips, highlighters, glue or correction fluid.

DO NOT WRITE IN ANY BARCODES.

Answer **all** questions.

If working is needed for any question it must be shown below that question.

Electronic calculators should be used.

If the degree of accuracy is not specified in the question, and if the answer is not exact, give the answer to three significant figures. Give answers in degrees to one decimal place.

For π , use either your calculator value or 3.142.

At the end of the examination, fasten all your work securely together.

The number of marks is given in brackets [] at the end of each question or part question.

The total of the marks for this paper is 56.

This document consists of **11** printed pages and **1** blank page.



1 \geq $<$ $>$ $=$ \leq

Choose one of the above symbols to make a correct statement in the answer space.

*For
Examiner's
Use*

Answer $\frac{7}{9}$ 0.7 [1]

2 (a) Calculate $\frac{0.0584}{1.65 + 5.2 \times 7}$.

Answer(a) [1]

(b) Write 0.0584 in standard form.

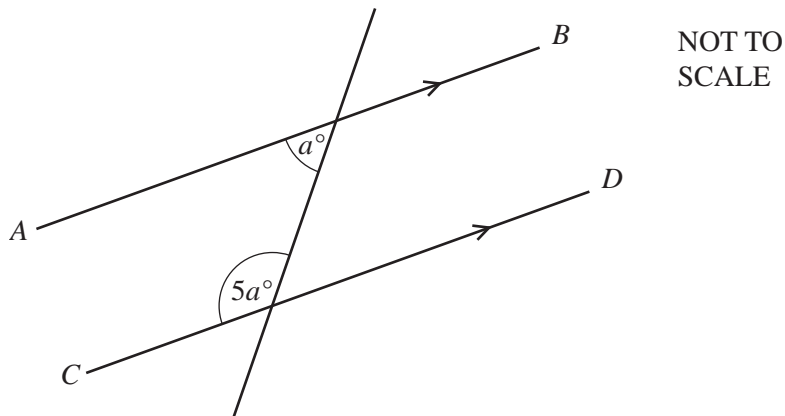
Answer(b) [1]

3 How many glasses, each holding 200 cm^3 , can be filled completely from a full 3.5 litre bottle of water?

Answer [2]

- 4 In the diagram AB is parallel to CD .

Calculate the value of a .



Answer $a =$ [2]

- 5 Hakim and Bashira measure their heights.
Hakim's height is 159 cm and Bashira's height is 167 cm, both correct to the nearest centimetre.

Find the greatest possible difference between their heights.

Answer cm [2]

- 6 (a) Write down the gradient of the line $y = 3x - 4$.

Answer(a) [1]

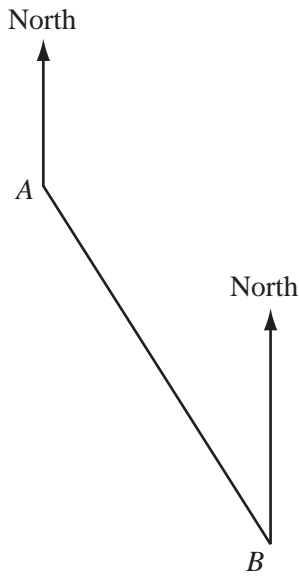
- (b) Write down the equation of a line through $(0, 0)$ parallel to $y = 3x - 4$.

Answer(b) [1]

7 A and B are two points marked on a map.

By measuring a suitable angle, find the bearing of A from B .

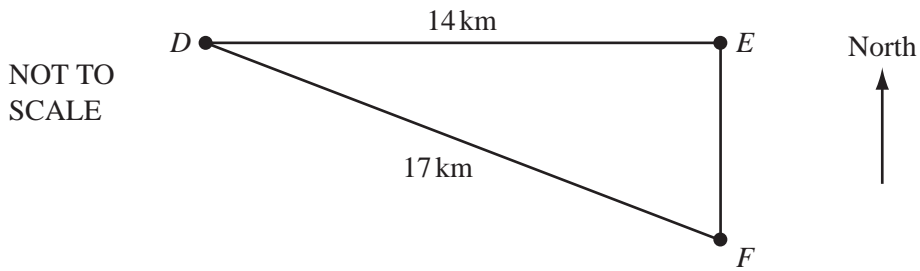
*For
Examiner's
Use*



Answer [2]

8 Town E is 14 kilometres due east of D .
Town F is due south of E , and $DF = 17$ kilometres.

Calculate the distance from E to F .



Answer km [2]

- 9 In 2007 Klaus paid 350 euros (€) for a flight from Berlin to Nairobi.

The return flight from Nairobi to Berlin cost him 30 700 Kenyan Shillings (KES).

The exchange rate at the time of the return flight was €1 = 79.6 KES.

Calculate the difference, in euros, between the costs of the two flights.
Give your answer correct to 2 decimal places.

Answer € [2]

- 10 (a) Expand and simplify $4(5c - 3d) - 7c$.

Answer(a) [2]

- (b) Factorise $m^2 - mn$.

Answer(b) [1]

- 11 (a) Find the lowest common multiple of 7 and 9.

Answer(a) [1]

- (b) Without using a calculator, work out $\frac{8}{9} - \frac{5}{7}$, leaving your answer as a fraction.
You must show all your working.

Answer(b) [2]

For
Examiner's
Use

12

$$z = 2x - y$$

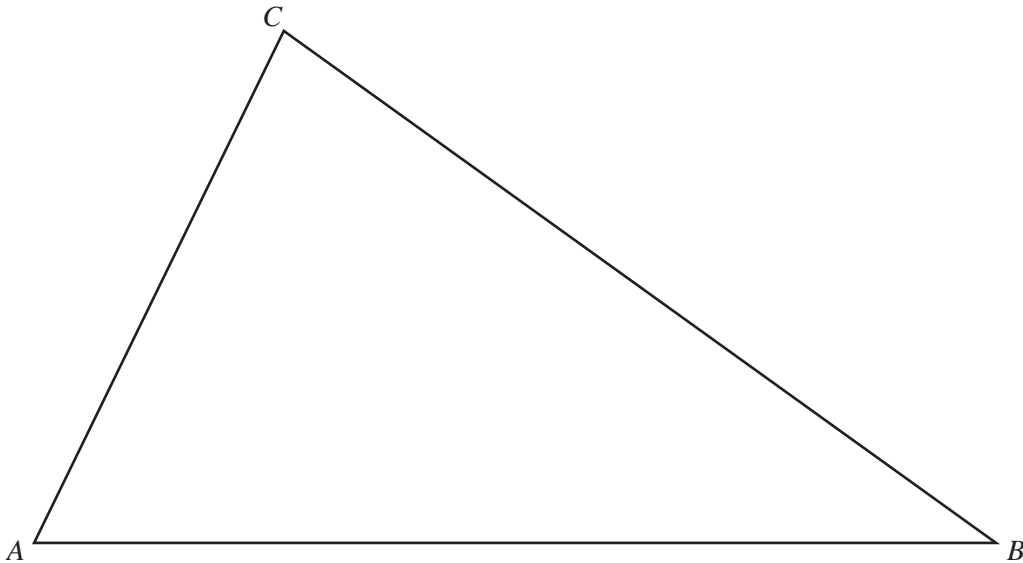
- (a) Find z when $x = -3$ and $y = 7$.

Answer(a) $z =$ [1]

- (b) Make x the subject of the formula.

Answer(b) $x =$ [2]

- 13 The diagram shows an accurate drawing of a triangular field.
1 centimetre represents 15 metres.
Florentina walks along a straight path from A to the side BC .
The path is always the same distance from AB and AC .



- (a) **Using a straight edge and compasses only**, construct the line of the path.
You must show your construction arcs clearly. [2]
- (b) The path meets BC at D .
How far, in metres, is Florentina from B when she reaches D ?

Answer(b) m [1]

14 x is an integer between 60 and 90.

Write down the value of x when it is

(a) an odd square number,

Answer(a) $x =$ [1]

(b) 4^3 ,

Answer(b) $x =$ [1]

(c) a multiple of 29,

Answer(c) $x =$ [1]

(d) a prime factor of 146.

Answer(d) $x =$ [1]

15 Simplify

(a) $4d \times 6d^4$,

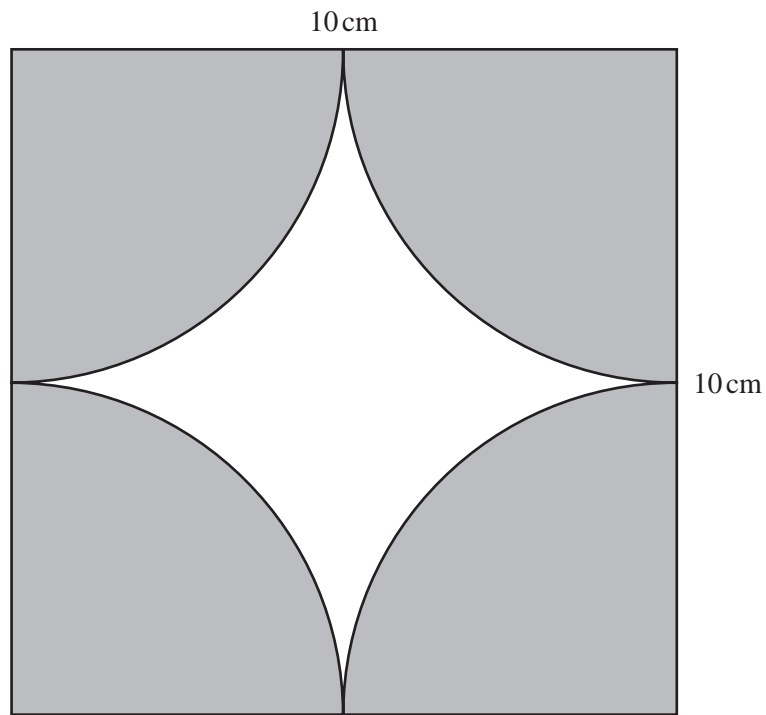
Answer(a) [2]

(b) $28t^3 \div 7t^{-4}$.

Answer(b) [2]

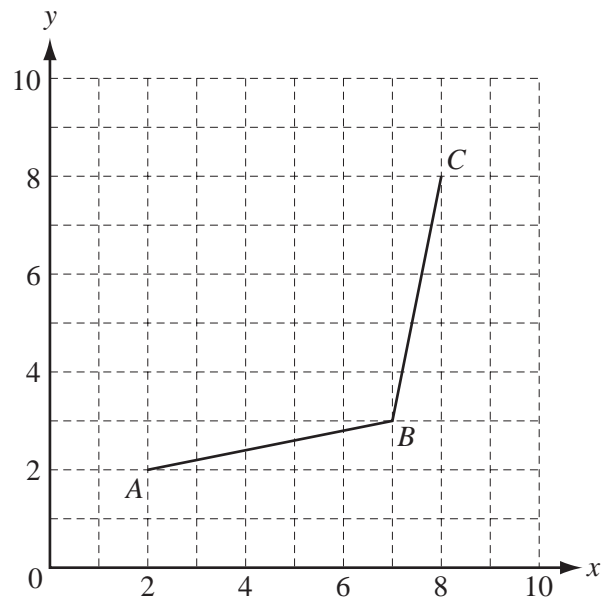
- 16 The diagram shows a square tile of side 10 centimetres with 4 identical quarter circles shaded.

*For
Examiner's
Use*



Calculate the area of the **unshaded** region.

Answer cm^2 [4]



Points A , B and C are shown on the grid.

(a) Plot the point D on the grid above so that $ABCD$ is a rhombus. [1]

(b) Write \vec{BD} as a column vector.

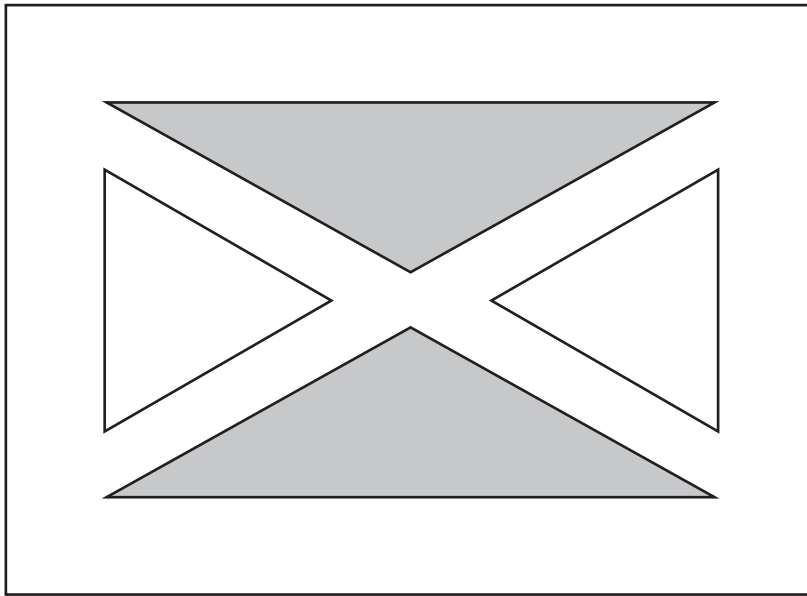
Answer(b) $\vec{BD} = \begin{pmatrix} \\ \end{pmatrix}$ [2]

(c) M is the mid-point of AC .
Write \vec{AM} as a column vector.

Answer(c) $\vec{AM} = \begin{pmatrix} \\ \end{pmatrix}$ [1]

18 The plan of a rectangular garden with 4 triangular flowerbeds is shown in the diagram.

For
Examiner's
Use



(a) Write down the name of the special triangles that are

(i) shaded,

Answer(a)(i) [1]

(ii) unshaded.

Answer(a)(ii) [1]

(b) State the order of rotational symmetry of the plan.

Answer(b) [1]

(c) Draw the lines of symmetry on the plan. [2]

19 A school has 360 students.

(a) On the school sports day 95% of the students were present.

Calculate how many students were **absent**.

Answer(a) [2]

(b) The table shows the number of students attending school in one week.

Monday	Tuesday	Wednesday	Thursday	Friday
334	329	348	341	323

For these values,

(i) calculate the mean,

Answer(b)(i) [2]

(ii) find the median,

Answer(b)(ii) [1]

(iii) find the range.

Answer(b)(iii) [1]

*For
Examiner's
Use*

BLANK PAGE

Permission to reproduce items where third-party owned material protected by copyright is included has been sought and cleared where possible. Every reasonable effort has been made by the publisher (UCLES) to trace copyright holders, but if any items requiring clearance have unwittingly been included, the publisher will be pleased to make amends at the earliest possible opportunity.

University of Cambridge International Examinations is part of the Cambridge Assessment Group. Cambridge Assessment is the brand name of University of Cambridge Local Examinations Syndicate (UCLES), which is itself a department of the University of Cambridge.