



UNIVERSITY OF CAMBRIDGE INTERNATIONAL EXAMINATIONS
International General Certificate of Secondary Education

CANDIDATE
NAME

CENTRE
NUMBER

--	--	--	--	--

CANDIDATE
NUMBER

--	--	--	--

* 7 1 5 3 6 0 3 1 9 7 *

MATHEMATICS

0580/23

Paper 2 (Extended)

October/November 2012

1 hour 30 minutes

Candidates answer on the Question Paper.

Additional Materials:

Electronic calculator
Mathematical tables (optional)

Geometrical instruments
Tracing paper (optional)

READ THESE INSTRUCTIONS FIRST

Write your Centre number, candidate number and name on all the work you hand in.

Write in dark blue or black pen.

You may use a pencil for any diagrams or graphs.

Do not use staples, paper clips, highlighters, glue or correction fluid.

DO NOT WRITE IN ANY BARCODES.

Answer **all** questions.

If working is needed for any question it must be shown below that question.

Electronic calculators should be used.

If the degree of accuracy is not specified in the question, and if the answer is not exact, give the answer to three significant figures. Give answers in degrees to one decimal place.

For π , use either your calculator value or 3.142.

At the end of the examination, fasten all your work securely together.

The number of marks is given in brackets [] at the end of each question or part question.

The total of the marks for this paper is 70.

This document consists of **12** printed pages.



- 1 Samantha invests \$600 at a rate of 2% per year simple interest.

Calculate the interest Samantha earns in 8 years.

Answer \$ [2]

- 2 Show that $\left(\frac{1}{10}\right)^2 + \left(\frac{2}{5}\right)^2 = 0.17$.

Write down all the steps in your working.

Answer

[2]

- 3 Jamie needs 300 g of flour to make 20 cakes.

How much flour does he need to make 12 cakes?

Answer g [2]

- 4 Expand the brackets.

$$y(3 - y^3)$$

Answer [2]

*For
Examiner's
Use*

- 5 Maria pays \$84 rent.
The rent is increased by 5%.
Calculate Maria's new rent.

Answer \$ [2]

6

\times^R

T^{\times}

Using a straight edge and compasses only, construct the locus of points which are equidistant from R and from T . [2]

- 7 Find the value of $\frac{7.2}{11.8 - 10.95}$.

Give your answer correct to 4 significant figures.

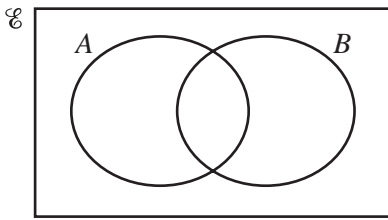
Answer [2]

- 8 A carton contains 250 ml of juice, correct to the nearest millilitre.
Complete the statement about the amount of juice, j ml, in the carton.

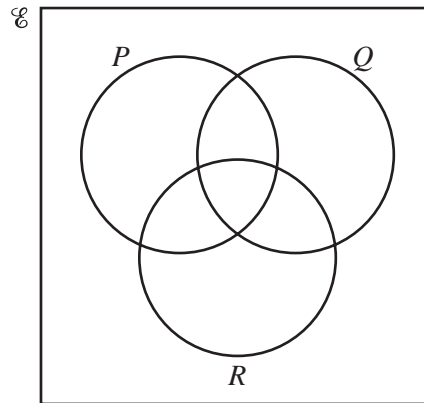
Answer $\leq j <$ [2]

For
Examiner's
Use

9 Shade the required region in each of the Venn diagrams.



A'



$(P \cap R) \cup Q$

[2]

10 Without using a calculator, show that $\left(\frac{49}{16}\right)^{-\frac{3}{2}} = \frac{64}{343}$.

Write down all the steps in your working.

Answer

[2]

11 Simplify $(256w^{256})^{\frac{1}{4}}$.

Answer

[2]

For
Examiner's
Use

12

Mass of parcel (m kilograms)	$0 < m \leq 0.5$	$0.5 < m \leq 1.5$	$1.5 < m \leq 3$
Frequency	20	18	9

*For
Examiner's
Use*

The table above shows information about parcels in a delivery van.

John wants to draw a histogram using this information.

Complete the table below.

Mass of parcel (m kilograms)	$0 < m \leq 0.5$	$0.5 < m \leq 1.5$	$1.5 < m \leq 3$
Frequency density		18	

[2]

13 Write the following as a single fraction in its simplest form.

$$\frac{x+2}{3} - \frac{2x-1}{4} + 1$$

Answer [3]

- 14 y varies inversely as the square root of x .
When $x = 9, y = 6$.

Find y when $x = 36$.

Answer $y =$ [3]

- 15 A model of a ship is made to a scale of 1 : 200.
The surface area of the model is 7500 cm^2 .

Calculate the surface area of the ship, giving your answer in square metres.

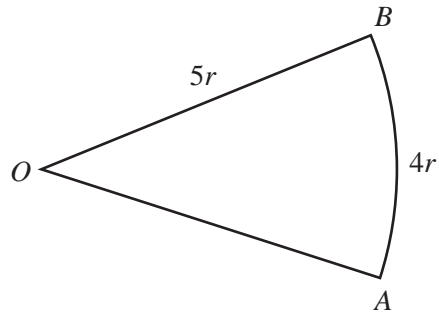
Answer m^2 [3]

- 16 Make y the subject of the formula.

$$A = \pi x^2 - \pi y^2$$

Answer $y =$ [3]

17

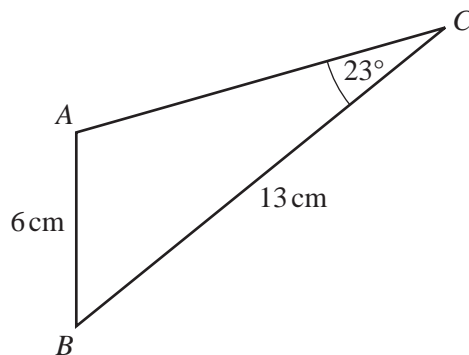
NOT TO
SCALE

The diagram shows a sector of a circle, centre O , radius $5r$.
The length of the arc AB is $4r$.

Find the area of the sector in terms of r , giving your answer in its simplest form.

Answer [3]

18

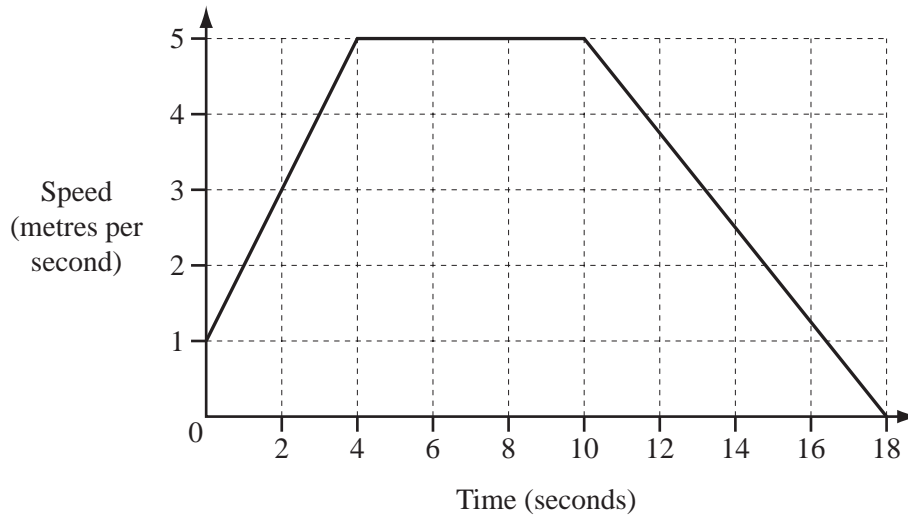
NOT TO
SCALE

In triangle ABC , $AB = 6\text{ cm}$, $BC = 13\text{ cm}$ and angle $ACB = 23^\circ$.
Calculate angle BAC , which is obtuse.

Answer Angle $BAC =$ [4]

For
Examiner's
Use

19



For
Examiner's
Use

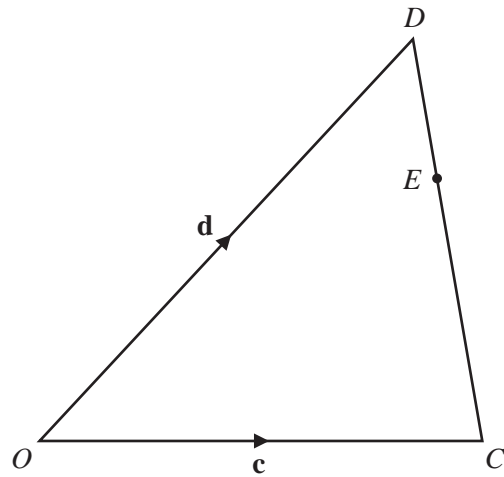
The diagram shows the speed-time graph for the last 18 seconds of Roman's cycle journey.

(a) Calculate the deceleration.

Answer(a) m/s² [1]

(b) Calculate the total distance Roman travels during the 18 seconds.

Answer(b) m [3]

NOT TO
SCALE

In the diagram, O is the origin.

$\vec{OC} = \mathbf{c}$ and $\vec{OD} = \mathbf{d}$.

E is on CD so that $CE = 2ED$.

Find, in terms of \mathbf{c} and \mathbf{d} , in their simplest forms,

(a) \vec{DE} ,

Answer(a) $\vec{DE} = \dots\dots\dots$ [2]

(b) the position vector of E .

Answer(b) $\dots\dots\dots$ [2]

21 Simplify the following.

$$\frac{h^2 - h - 20}{h^2 - 25}$$

For
Examiner's
Use

Answer [4]

22 (a) $\mathbf{M} = \begin{pmatrix} 3 & 2 \\ -1 & 1 \end{pmatrix}$

Find \mathbf{M}^{-1} , the inverse of \mathbf{M} .

Answer(a) $\begin{pmatrix} & \\ & \end{pmatrix}$ [2]

(b) \mathbf{D} , \mathbf{E} and \mathbf{X} are 2×2 matrices.
 \mathbf{I} is the identity 2×2 matrix.

(i) Simplify \mathbf{DI} .

Answer(b)(i) [1]

(ii) $\mathbf{DX} = \mathbf{E}$
Write \mathbf{X} in terms of \mathbf{D} and \mathbf{E} .

Answer(b)(ii) $\mathbf{X} =$ [1]

23 $f(x) = 3x + 5$ $g(x) = 4x - 1$

(a) Find the value of $gg(3)$.

Answer(a) [2]

(b) Find $fg(x)$, giving your answer in its simplest form.

Answer(b) $fg(x) =$ [2]

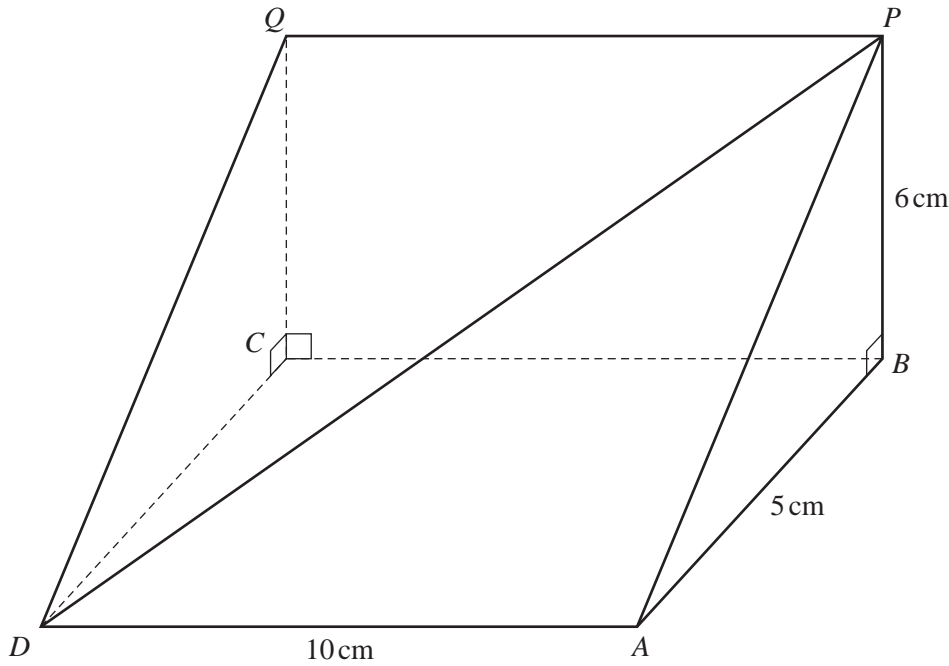
(c) Solve the equation.

$$f^{-1}(x) = 11$$

Answer(c) $x =$ [1]

Question 24 is printed on the next page.

*For
Examiner's
Use*



NOT TO
SCALE

The diagram shows a triangular prism.
 $ABCD$ is a horizontal rectangle with $DA = 10$ cm and $AB = 5$ cm.
 $BCQP$ is a vertical rectangle and $BP = 6$ cm.

Calculate

- (a) the length of DP ,

Answer(a) $DP =$ cm [3]

- (b) the angle between DP and the horizontal rectangle $ABCD$.

Answer(b) [3]

Permission to reproduce items where third-party owned material protected by copyright is included has been sought and cleared where possible. Every reasonable effort has been made by the publisher (UCLES) to trace copyright holders, but if any items requiring clearance have unwittingly been included, the publisher will be pleased to make amends at the earliest possible opportunity.

University of Cambridge International Examinations is part of the Cambridge Assessment Group. Cambridge Assessment is the brand name of University of Cambridge Local Examinations Syndicate (UCLES), which is itself a department of the University of Cambridge.