

**CHEMISTRY****0620/12**

Paper 1 Multiple Choice

October/November 2013**45 Minutes**

Additional Materials: Multiple Choice Answer Sheet
 Soft clean eraser
 Soft pencil (type B or HB is recommended)

**READ THESE INSTRUCTIONS FIRST**

Write in soft pencil.

Do not use staples, paper clips, highlighters, glue or correction fluid.

Write your name, Centre number and candidate number on the Answer Sheet in the spaces provided unless this has been done for you.

DO NOT WRITE IN ANY BARCODES.There are **forty** questions on this paper. Answer **all** questions. For each question there are four possible answers **A, B, C** and **D**.Choose the **one** you consider correct and record your choice in **soft pencil** on the separate Answer Sheet.**Read the instructions on the Answer Sheet very carefully.**

Each correct answer will score one mark. A mark will not be deducted for a wrong answer.

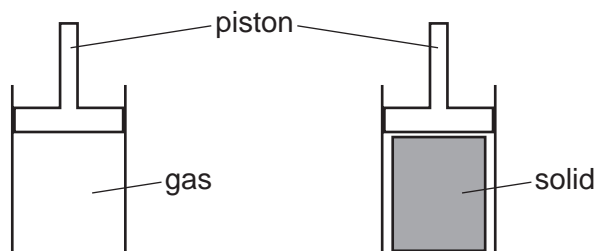
Any rough working should be done in this booklet.

A copy of the Periodic Table is printed on page 20.

Electronic calculators may be used.

This document consists of **18** printed pages and **2** blank pages.

- 1 An attempt was made to compress a gas and a solid using the apparatus shown.



Which substance would be compressed and what is the reason for this?

	substance	reason
A	gas	the gas particles are close together
B	gas	the gas particles are far apart
C	solid	the solid particles are close together
D	solid	the solid particles are far apart

- 2 A student measures the rate of two reactions.

In one reaction, there is a change in mass of the reactants during the reaction.

In the second reaction, there is a change in temperature during the reaction.

Which piece of apparatus would be essential in **both** experiments?

- A** balance
- B** clock
- C** pipette
- D** thermometer

3 Diagram 1 shows the paper chromatogram of substance X.

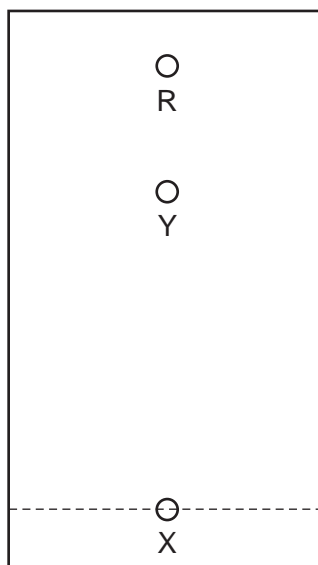


diagram 1

Diagram 2 shows the cooling curve for substance Y.

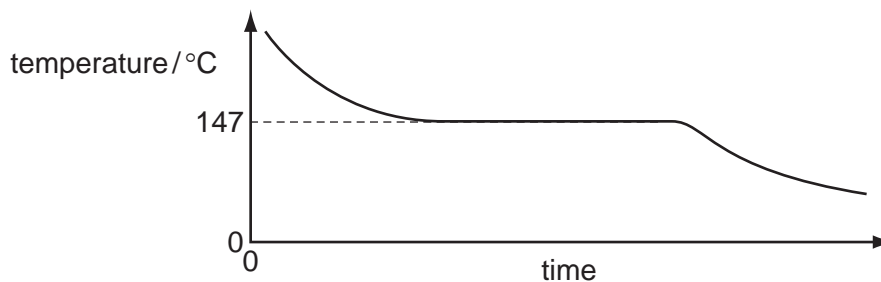


diagram 2

Which statement about X and Y is correct?

- A** X is a mixture and Y is a pure substance.
- B** X is a pure substance and Y is a mixture.
- C** X and Y are mixtures.
- D** X and Y are pure substances.

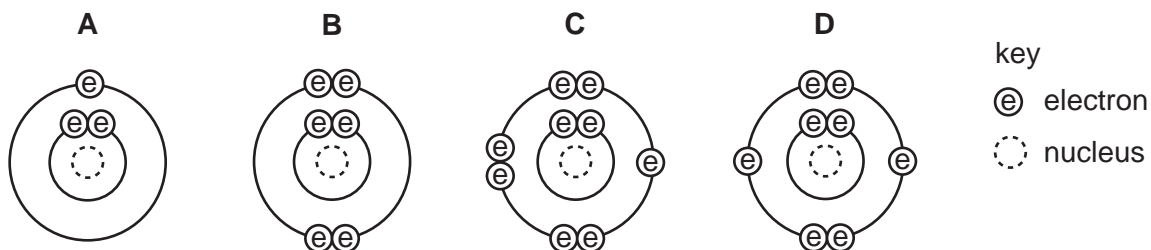
4 Which statements about a sodium atom, ${}_{11}^{23}\text{Na}$, are correct?

- 1 The number of protons and neutrons is the same.
- 2 The number of protons and electrons is the same.
- 3 The number of outer electrons is one.

- A** 1, 2 and 3
- B** 1 and 2 only
- C** 1 and 3 only
- D** 2 and 3 only

5 The diagrams show the electron arrangements in the atoms of four elements.

Which element does **not** form a covalent bond?



6 Rubidium is in Group I of the Periodic Table and bromine is in Group VII.

Rubidium reacts with bromine to form an ionic compound.

Which row shows the electron change taking place for rubidium and the correct formula of the rubidium ion?

	electron change	formula of ion formed
A	electron gained	Rb^+
B	electron gained	Rb^-
C	electron lost	Rb^+
D	electron lost	Rb^-

7 Element X has 7 protons.

Element Y has 8 more protons than X.

Which statement about element Y is correct?

- A** Y has more electron shells than X.
- B** Y has more electrons in its outer shell than X.
- C** Y is in a different group of the Periodic Table from X.
- D** Y is in the same period of the Periodic Table as X.

8 The formulae of compounds W, X and Y are shown.

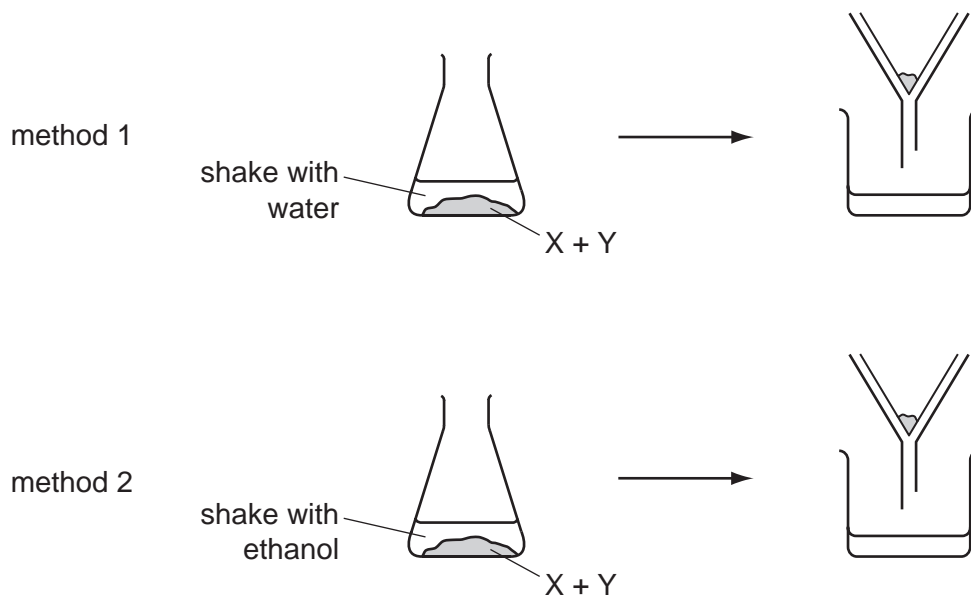


Which statement is correct?

- A W contains twice as many hydrogen atoms as oxygen atoms.
- B X contains the most oxygen atoms.
- C Y contains the most hydrogen atoms.
- D Y contains the same number of hydrogen and oxygen atoms.

9 A solid mixture contains an ionic salt, X, and a covalent organic compound, Y.

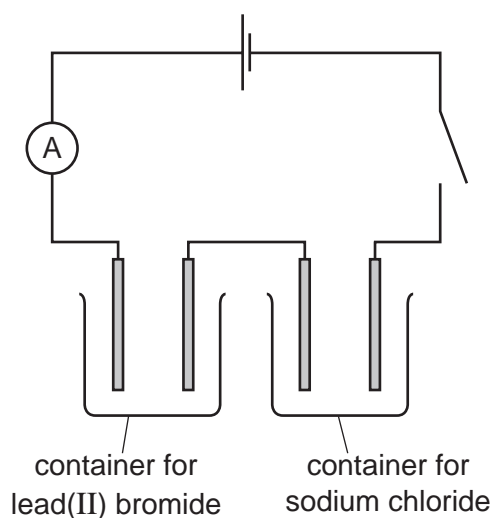
Two students suggest methods of separating the mixture as shown.



Which methods of separation are likely to work?

	1	2
A	✓	✓
B	✓	x
C	x	✓
D	x	x

- 10 The diagram shows the circuit for electrolysis of lead(II) bromide and sodium chloride to liberate the metal.



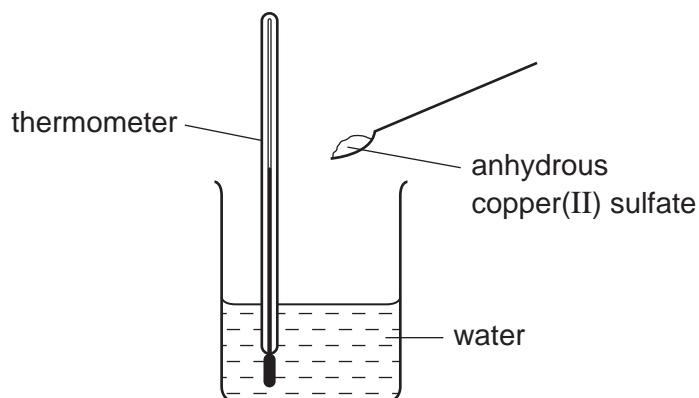
In what form are these salts electrolysed for liberating the metal?

	lead(II) bromide	sodium chloride
A	concentrated solution	concentrated solution
B	concentrated solution	molten
C	molten	concentrated solution
D	molten	molten

- 11 Which relative molecular mass, M_r , is **not** correct for the molecule given?

	molecule	M_r
A	ammonia, NH_3	17
B	carbon dioxide, CO_2	44
C	methane, CH_4	16
D	oxygen, O_2	16

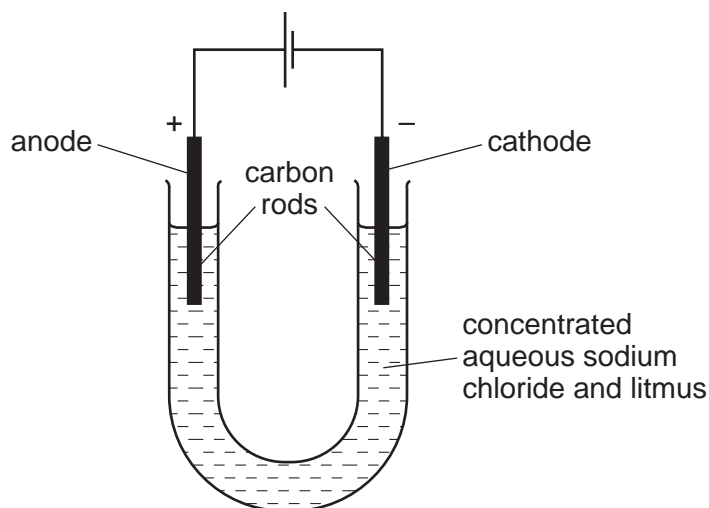
12 When anhydrous copper(II) sulfate is added to water a solution is formed and heat is given out.



Which row correctly shows the temperature change and the type of reaction taking place?

	temperature change	type of reaction
A	decreases	endothermic
B	decreases	exothermic
C	increases	endothermic
D	increases	exothermic

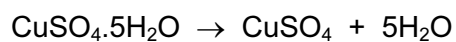
13 The diagram shows the electrolysis of concentrated aqueous sodium chloride.



What is the colour of the litmus at each electrode after five minutes?

	colour at anode	colour at cathode
A	blue	red
B	red	blue
C	red	colourless
D	colourless	blue

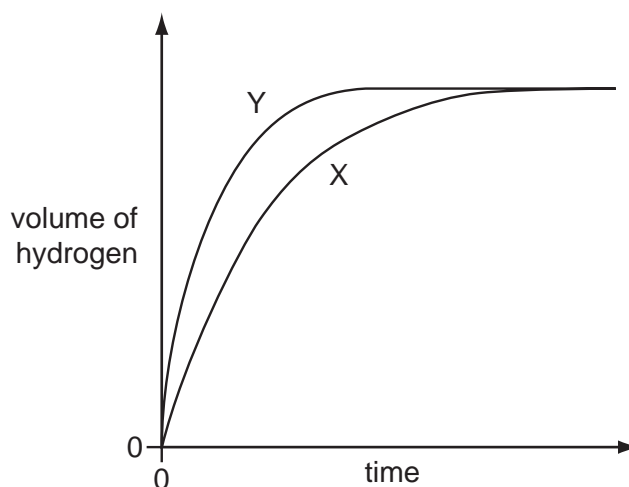
- 14 Anhydrous copper(II) sulfate can be made by heating hydrated copper(II) sulfate.



What can be added to anhydrous copper(II) sulfate to turn it into hydrated copper(II) sulfate?

- A concentrated sulfuric acid
 - B sodium hydroxide powder
 - C sulfur dioxide
 - D water
- 15 Which fuel does **not** produce carbon dioxide when it burns?
- A coal
 - B hydrogen
 - C methane
 - D petrol
- 16 A student investigates the rate of reaction between zinc and an excess of sulfuric acid.

The graph shows the results of two experiments, X and Y.



Which change explains the difference between X and Y?

- A A catalyst is added in Y.
- B A lower temperature is used in Y.
- C Larger pieces of zinc are used in Y.
- D Less concentrated acid is used in Y.

17 Which are properties of an acid?

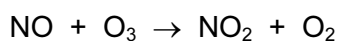
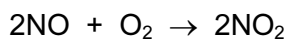
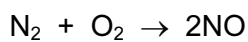
- 1 reacts with ammonium sulfate to form ammonia
- 2 turns red litmus blue

	1	2
A	✓	✓
B	✓	x
C	x	✓
D	x	x

18 Which of the following are properties of the oxides of non-metals?

	property 1	property 2
A	acidic	covalent
B	acidic	ionic
C	basic	covalent
D	basic	ionic

19 The reactions shown may occur in the air during a thunder storm.



Which row shows what happens to the reactant molecules in each of these reactions?

	N_2	NO	O_3
A	oxidised	oxidised	oxidised
B	oxidised	oxidised	reduced
C	reduced	reduced	oxidised
D	reduced	reduced	reduced

- 20 Calcium, on the left of Period 4 of the Periodic Table, is more metallic than bromine on the right of this period.

Why is this?

Calcium has

- A fewer electrons.
 - B fewer protons.
 - C fewer full shells of electrons.
 - D fewer outer shell electrons.
- 21 Compound X is tested and the results are shown in the table.

test	result
aqueous sodium hydroxide is added, then heated gently	gas given off which turns damp red litmus paper blue
dilute hydrochloric acid is added	effervescence, gas given off which turns limewater milky

Which ions are present in compound X?


- A ammonium ions and carbonate ions
 - B ammonium ions and chloride ions
 - C calcium ions and carbonate ions
 - D calcium ions and chloride ions
- 22 Some properties of four elements W, X, Y and Z are listed.

- 1 W melts at 1410°C and forms an acidic oxide.
- 2 X has a high density and is easily drawn into wires.
- 3 Y acts as a catalyst and its oxide reacts with acids.
- 4 Z is a red-brown solid used to make alloys.

Which of the elements are metals?

- A 1 and 3
- B 2, 3 and 4
- C 2 and 3 only
- D 2 and 4 only

26 Equations P and Q represent two reactions which occur inside a blast furnace.



Which type of reactions are P and Q?

	P	Q
A	redox	redox
B	redox	thermal decomposition
C	thermal decomposition	redox
D	thermal decomposition	thermal decomposition

27 Farmers add calcium oxide (lime) and ammonium salts to their fields.

The compounds are not added at the same time because they react with each other.

Which gas is produced in this reaction?

- A** ammonia
- B** carbon dioxide
- C** hydrogen
- D** nitrogen

28 Which row describes the uses of mild steel and stainless steel?

	mild steel	stainless steel
A	car bodies, cutlery	chemical plant, machinery
B	car bodies, machinery	chemical plant, cutlery
C	chemical plant, cutlery	car bodies, machinery
D	chemical plant, machinery	car bodies, cutlery

29 Reactions of three metals and their oxides are listed in the table.

metal	reacts with cold water	metal oxide reacts with carbon
W	no	no
X	no	yes
Y	yes	no

What is the order of reactivity of the metals?

	least reactive	—————→	most reactive
A	W	X	Y
B	X	W	Y
C	X	Y	W
D	Y	W	X

30 The diagrams show four uses of iron.

In which of these uses is the iron most likely to rust?

A




iron bucket
electroplated
with zinc

B




iron cored
aluminium
electricity cables

C



iron hinges
on a gate

D



painted
iron fence

31 In which process is carbon dioxide **not** formed?

- A** burning of natural gas
- B** fermentation
- C** heating lime
- D** respiration

32 M is a shiny silver metal. It has a melting point of 1455 °C. Many of its compounds are green.

What is metal M?

- A aluminium
- B copper
- C mercury
- D nickel

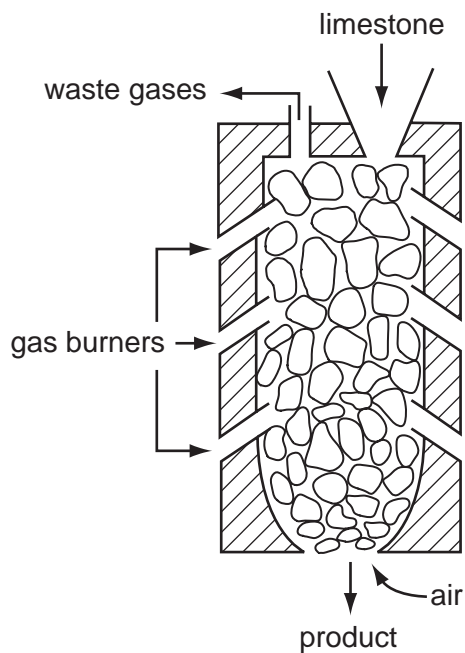
33 In many countries river water is used for the washing of clothes.

The same water is not considered to be safe for drinking.

Why is it **not** safe for drinking?

- A because river water contains dissolved salts
- B because river water may contain harmful bacteria
- C because river water may contain small particles of sand
- D because river water may contain soap from washing clothes

34 The diagram shows a kiln used to heat limestone.



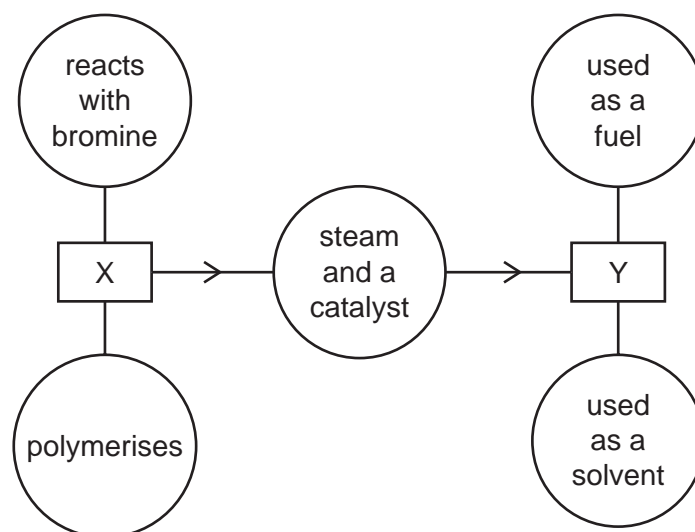
What is the product and what waste gas is formed?

	product	waste gas
A	lime, CaO	carbon monoxide
B	lime, CaO	carbon dioxide
C	slaked lime, Ca(OH) ₂	carbon monoxide
D	slaked lime, Ca(OH) ₂	carbon dioxide

35 Which air pollutant is **not** made when coal burns in a power station?

- A** carbon monoxide
- B** lead compounds
- C** nitrogen oxides
- D** sulfur dioxide

36 The diagram shows some properties of two organic compounds X and Y.



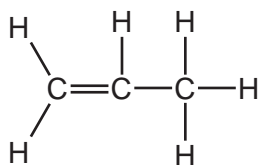
What are X and Y?

	X	Y
A	ethane	ethanoic acid
B	ethane	ethanol
C	ethene	ethanoic acid
D	ethene	ethanol

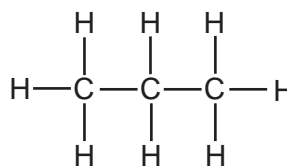
37 Three types of organic compound are alkanes, alkenes and alcohols.

Which structure does **not** belong to any of these three types of compound?

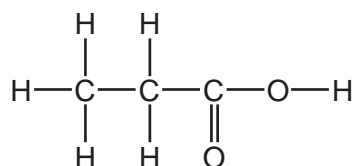
A



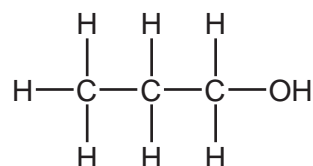
B



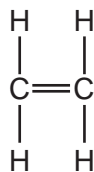
C



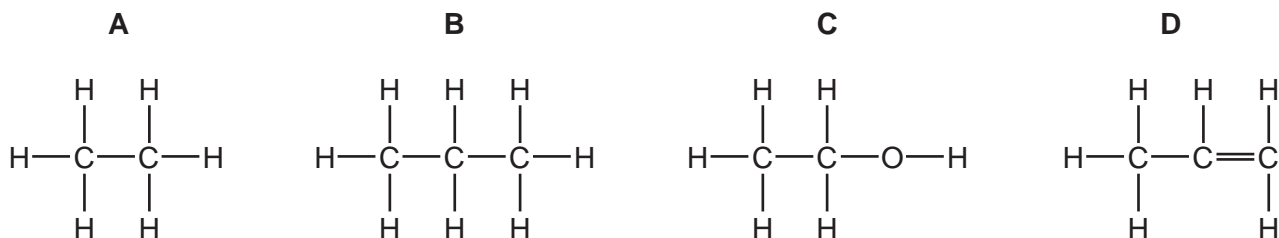
D



38 The diagram represents ethene.



Which compound has chemical properties similar to those of ethene?

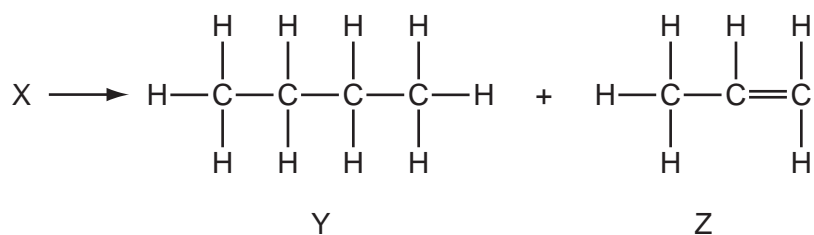


39 Petroleum is a mixture of hydrocarbons which can be separated into fractions using fractional distillation.

Which fraction is used as fuel in jet engines?

- A bitumen
- B gasoline
- C kerosene
- D naphtha

40 A chemist carried out a cracking reaction on a hydrocarbon, X, and obtained two products, Y and Z.



The chemist then wrote the following statements in his notebook.

- 1 A molecule of X has 7 carbon atoms.
- 2 Y is unsaturated.
- 3 Z will decolourise bromine water.

Which statements are correct?

- A 3 only
- B 1 and 2
- C 1 and 3
- D 1, 2 and 3

DATA SHEET
The Periodic Table of the Elements

		Group																																																																																																																																																																																																																																																																																																																																																																																																																																																																																																																																																																																																																																																																																																																																																																																																																																																																																																																																																																															
		I	II	III	IV	V	VI	VII	VIII	IX	X																																																																																																																																																																																																																																																																																																																																																																																																																																																																																																																																																																																																																																																																																																																																																																																																																																																																																																																																																																						
		1 H Hydrogen 1																																																																																																																																																																																																																																																																																																																																																																																																																																																																																																																																																																																																																																																																																																																																																																																																																																																																																																																																																																															
		4 He Helium 2																																																																																																																																																																																																																																																																																																																																																																																																																																																																																																																																																																																																																																																																																																																																																																																																																																																																																																																																																																															
7	9	3	4	5	6	7	8	9	10	11	12	13	14	15	16	17	18	19	20																																																																																																																																																																																																																																																																																																																																																																																																																																																																																																																																																																																																																																																																																																																																																																																																																																																																																																																																																														
Li Lithium	Be Beryllium	B Boron	C Carbon	N Nitrogen	O Oxygen	F Fluorine	Ne Neon	Na Sodium	Mg Magnesium	Al Aluminium	Si Silicon	P Phosphorus	S Sulfur	Cl Chlorine	Ar Argon	K Potassium	Ca Calcium	Sc Scandium	Ti Titanium	V Vanadium	Cr Chromium	Mn Manganese	Fe Iron	Co Cobalt	Ni Nickel	Cu Copper	Zn Zinc	Ga Gallium	Ge Germanium	As Arsenic	Se Selenium	Br Bromine	Kr Krypton																																																																																																																																																																																																																																																																																																																																																																																																																																																																																																																																																																																																																																																																																																																																																																																																																																																																																																																																																
19	20	21	22	23	24	25	26	27	28	29	30	31	32	33	34	35	36	37	38	39	40	41	42	43	44	45	46	47	48	49	50	51	52	53	54	55	56	57	58	59	60	61	62	63	64	65	66	67	68	69	70	71	72	73	74	75	76	77	78	79	80	81	82	83	84	85	86																																																																																																																																																																																																																																																																																																																																																																																																																																																																																																																																																																																																																																																																																																																																																																																																																																																																																																														
Rb Rubidium	Sr Strontium	Y Yttrium	Zr Zirconium	Nb Niobium	Mo Molybdenum	Tc Technetium	Ru Ruthenium	Rh Rhodium	Pd Palladium	Ag Silver	Cd Cadmium	In Indium	Sn Tin	Sb Antimony	Te Tellurium	I Iodine	Xe Xenon	Cs Caesium	Ba Barium	La Lanthanum	Ce Cerium	Pr Praseodymium	Nd Neodymium	Pm Promethium	Sm Samarium	Eu Europium	Gd Gadolinium	Tb Terbium	Dy Dysprosium	Ho Holmium	Er Erbium	Tm Thulium	Yb Ytterbium	Lu Lutetium	Fr Francium	Ra Radium	Ac Actinium	Th Thorium	Pa Protactinium	U Uranium	Np Neptunium	Pu Plutonium	Am Americium	Cm Curium	Bk Berkelium	Cf Californium	Es Einsteinium	Fm Fermium	Md Mendelevium	No Nobelium	Lr Lawrencium																																																																																																																																																																																																																																																																																																																																																																																																																																																																																																																																																																																																																																																																																																																																																																																																																																																																																																																														
55	56	57	58	59	60	61	62	63	64	65	66	67	68	69	70	71	72	73	74	75	76	77	78	79	80	81	82	83	84	85	86	87	88	89	90	91	92	93	94	95	96	97	98	99	100	101	102	103	104	105	106	107	108	109	110	111	112	113	114	115	116	117	118	119	120	121	122	123	124	125	126	127	128	129	130	131	132	133	134	135	136	137	138	139	140	141	142	143	144	145	146	147	148	149	150	151	152	153	154	155	156	157	158	159	160	161	162	163	164	165	166	167	168	169	170	171	172	173	174	175	176	177	178	179	180	181	182	183	184	185	186	187	188	189	190	191	192	193	194	195	196	197	198	199	200	201	202	203	204	205	206	207	208	209	210	211	212	213	214	215	216	217	218	219	220	221	222	223	224	225	226	227	228	229	230	231	232	233	234	235	236	237	238	239	240	241	242	243	244	245	246	247	248	249	250	251	252	253	254	255	256	257	258	259	260	261	262	263	264	265	266	267	268	269	270	271	272	273	274	275	276	277	278	279	280	281	282	283	284	285	286	287	288	289	290	291	292	293	294	295	296	297	298	299	300	301	302	303	304	305	306	307	308	309	310	311	312	313	314	315	316	317	318	319	320	321	322	323	324	325	326	327	328	329	330	331	332	333	334	335	336	337	338	339	340	341	342	343	344	345	346	347	348	349	350	351	352	353	354	355	356	357	358	359	360	361	362	363	364	365	366	367	368	369	370	371	372	373	374	375	376	377	378	379	380	381	382	383	384	385	386	387	388	389	390	391	392	393	394	395	396	397	398	399	400	401	402	403	404	405	406	407	408	409	410	411	412	413	414	415	416	417	418	419	420	421	422	423	424	425	426	427	428	429	430	431	432	433	434	435	436	437	438	439	440	441	442	443	444	445	446	447	448	449	450	451	452	453	454	455	456	457	458	459	460	461	462	463	464	465	466	467	468	469	470	471	472	473	474	475	476	477	478	479	480	481	482	483	484	485	486	487	488	489	490	491	492	493	494	495	496	497	498	499	500	501	502	503	504	505	506	507	508	509	510	511	512	513	514	515	516	517	518	519	520	521	522	523	524	525	526	527	528	529	530	531	532	533	534	535	536	537	538	539	540	541	542	543	544	545	546	547	548	549	550	551	552	553	554	555	556	557	558	559	560	561	562	563	564	565	566	567	568	569	570	571	572	573	574	575	576	577	578	579	580	581	582	583	584	585	586	587	588	589	590	591	592	593	594	595	596	597	598	599	600	601	602	603	604	605	606	607	608	609	610	611	612	613	614	615	616	617	618	619	620	621	622	623	624	625	626	627	628	629	630	631	632	633	634	635	636	637	638	639	640	641	642	643	644	645	646	647	648	649	650	651	652	653	654	655	656	657	658	659	660	661	662	663	664	665	666	667	668	669	670	671	672	673	674	675	676	677	678	679	680	681	682	683	684	685	686	687	688	689	690	691	692	693	694	695	696	697	698	699	700	701	702	703	704	705	706	707	708	709	710	711	712	713	714	715	716	717	718	719	720	721	722	723	724	725	726	727	728	729	730	731	732	733	734	735	736	737	738	739	740	741	742	743	744	745	746	747	748	749	750	751	752	753	754	755	756	757	758	759	760	761	762	763	764	765	766	767	768	769	770	771	772	773	774	775	776	777	778	779	780	781	782	783	784	785	786	787	788	789	790	791	792	793	794	795	796	797	798	799	800	801	802	803	804	805	806	807	808	809	810	811	812	813	814	815	816	817	818	819	820	821	822	823	824	825	826	827	828	829	830	831	832	833	834	835	836	837	838	839	840	841	842	843	844	845	846	847	848	849	850	851	852	853	854	855	856	857	858	859	860	861	862	863	864	865	866	867	868	869	870	871	872	873	874	875	876	877	878	879	880	881	882	883	884	885	886	887	888	889	890	891	892	893	894	895	896	897	898	899	900	901	902	903	904	905	906	907	908	909	910	911	912	913	914	915	916	917	918	919	920	921	922	923	924	925	926	927	928	929	930	931	932	933	934	935	936	937	938	939	940	941	942	943	944	945	946	947	948	949	950	951	952	953	954	955	956	957	958	959	960	961	962	963	964	965	966	967	968	969	970	971	972	973	974	975	976	977	978	979	980	981	982	983	984	985	986	987	988	989	990	991	992	993	994	995	996	997	998	999	1000

*58-71 Lanthanoid series
†90-103 Actinoid series

a	X	
b	†	

Key
a = relative atomic mass
X = atomic symbol
b = proton (atomic) number

The volume of one mole of any gas is 24 dm³ at room temperature and pressure (r.t.p.).

Permission to reproduce items where third-party owned material protected by copyright is included has been sought and cleared where possible. Every reasonable effort has been made by the publisher (UCLES) to trace copyright holders, but if any items requiring clearance have unwittingly been included, the publisher will be pleased to make amends at the earliest possible opportunity.

Cambridge International Examinations is part of the Cambridge Assessment Group. Cambridge Assessment is the brand name of University of Cambridge Local Examinations Syndicate (UCLES), which is itself a department of the University of Cambridge.