



UNIVERSITY OF CAMBRIDGE INTERNATIONAL EXAMINATIONS  
International General Certificate of Secondary Education

CANDIDATE  
NAME

CENTRE  
NUMBER

--	--	--	--	--

CANDIDATE  
NUMBER

--	--	--	--

**CHEMISTRY**

**0620/06**

Paper 6 Alternative to Practical

**May/June 2009**

**1 hour**

Candidates answer on the Question Paper.

No additional materials are required.



**READ THESE INSTRUCTIONS FIRST**

Write your Centre number, candidate number and name on all the work you hand in.

Write in dark blue or black pen.

You may use a pencil for any diagrams, graphs or rough working.

Do not use staples, paper clips, highlighters, glue or correction fluid.

**DO NOT WRITE IN ANY BARCODES.**

Answer **all** questions.

At the end of the examination, fasten all your work securely together.

The number of marks is given in brackets [ ] at the end of each question or part question.

For Examiner's Use	
<b>1</b>	
<b>2</b>	
<b>3</b>	
<b>4</b>	
<b>5</b>	
<b>6</b>	
<b>Total</b>	

This document consists of **12** printed pages and **4** blank pages.



**BLANK PAGE**



- 2 An experiment was carried out to measure the temperature changes during the neutralisation of sodium hydroxide solution with dilute hydrochloric acid. Both solutions were allowed to stand in the laboratory for about 30 minutes.

For  
Examiner's  
Use

25 cm<sup>3</sup> of sodium hydroxide solution was added to a polystyrene beaker and the temperature was measured. 10 cm<sup>3</sup> of hydrochloric acid was added to the beaker and the highest temperature reached measured.

The experiment was repeated using different volumes of acid.

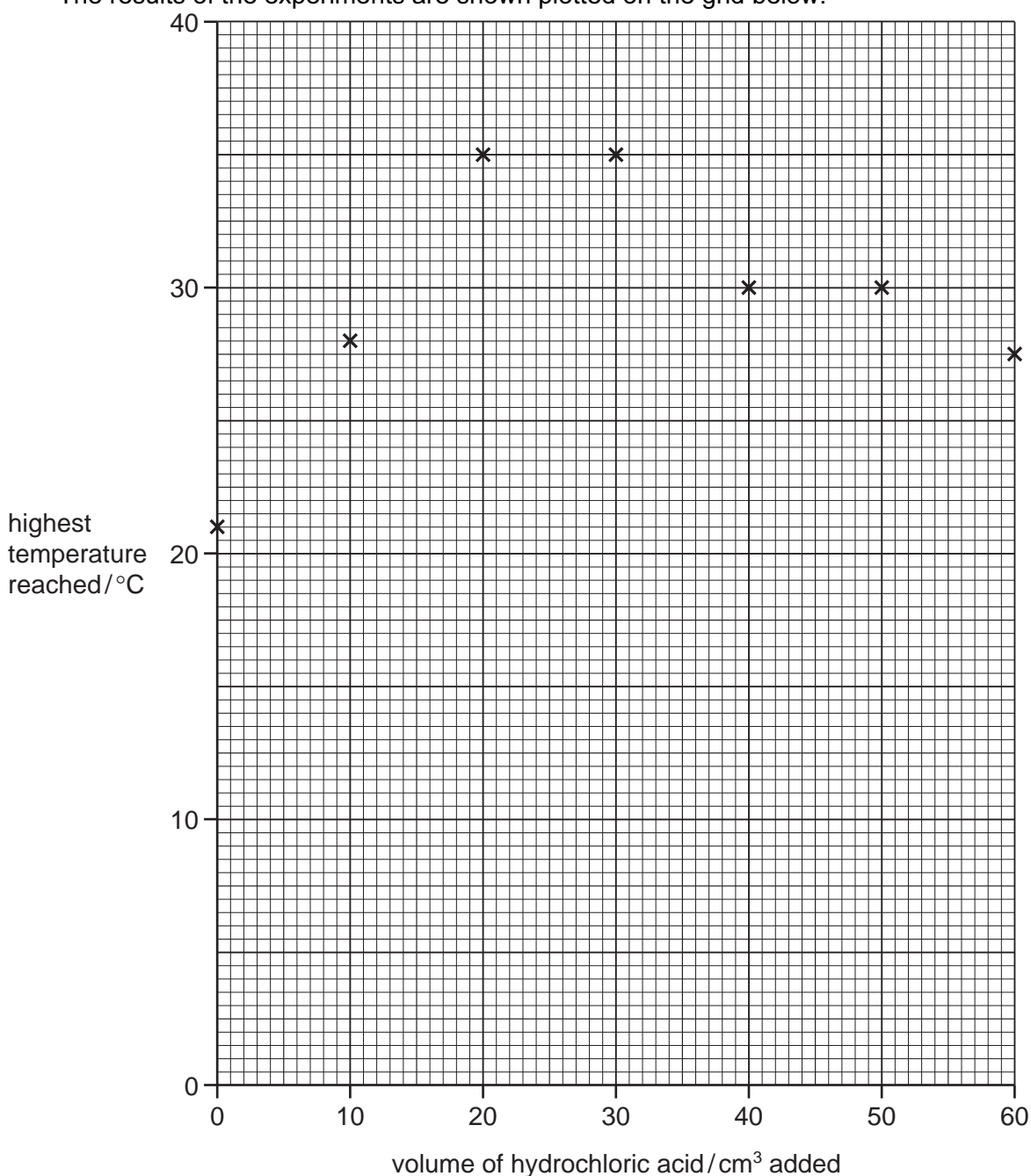
- (a) Why were the solutions left to stand for about 30 minutes before the experiments?

..... [1]

- (b) Why was a polystyrene beaker used instead of a glass beaker?

..... [1]

The results of the experiments are shown plotted on the grid below.



- (c) What type of chemical reaction occurs when sodium hydroxide is neutralised by hydrochloric acid?

..... [1]

- (d) (i) Which point appears to be inaccurate?

..... [1]

- (ii) Draw **two** straight lines through the points and extend them until they cross. [2]

- (iii) What volume of hydrochloric acid was needed to neutralise 25 cm<sup>3</sup> of the sodium hydroxide solution?

..... [2]

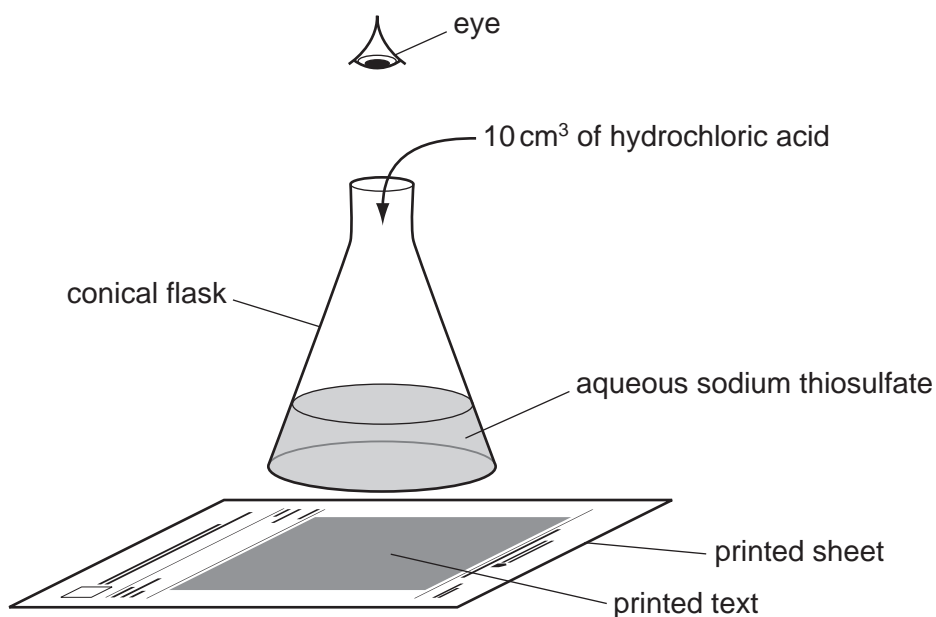
[Total: 8]

For  
Examiner's  
Use



- 4 A student investigated the effect of temperature on the speed of reaction between hydrochloric acid and aqueous sodium thiosulfate. When these chemicals react they form a precipitate, which makes the solution go cloudy. The formation of this precipitate can be used to show how fast the reaction proceeds, using the set up shown below.

For  
Examiner's  
Use



Five experiments were carried out.

#### *Experiment 1*

By using a measuring cylinder 50 cm<sup>3</sup> of aqueous sodium thiosulfate was poured into a flask. The temperature of the solution was measured. The conical flask was placed on the printed text.

10 cm<sup>3</sup> of hydrochloric acid was added to the flask and the timer started. The time taken for the printed text to disappear from view was recorded in the table. The final temperature of the mixture was measured.

#### *Experiment 2*

50 cm<sup>3</sup> of aqueous sodium thiosulfate was poured into a conical flask. The solution was heated until the temperature was about 30 °C. The temperature of the solution was measured.

10 cm<sup>3</sup> of hydrochloric acid was added to the flask and *Experiment 1* was repeated. The final temperature of the liquid was measured.

#### *Experiment 3*

*Experiment 2* was repeated but the sodium thiosulfate solution was heated to about 40 °C before adding the hydrochloric acid.

The initial and final temperatures were measured.

#### *Experiment 4*

*Experiment 2* was repeated but the sodium thiosulfate solution was heated to about 50 °C before adding the hydrochloric acid.

The initial and final temperatures were measured.

*Experiment 5*For  
Examiner's  
Use

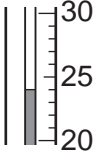
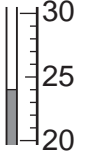
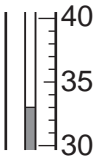
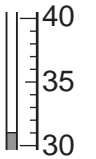
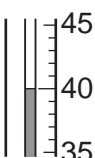
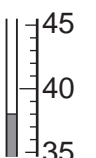
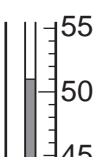
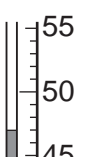
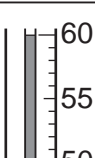
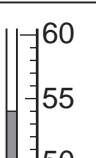
*Experiment 2* was repeated but the sodium thiosulfate solution was heated to about 60 °C before adding the hydrochloric acid.

The initial and final temperatures were measured.

Use the thermometer diagrams to record all of the initial and final temperatures in the table.

(a) Complete the table of results to show the average temperatures.

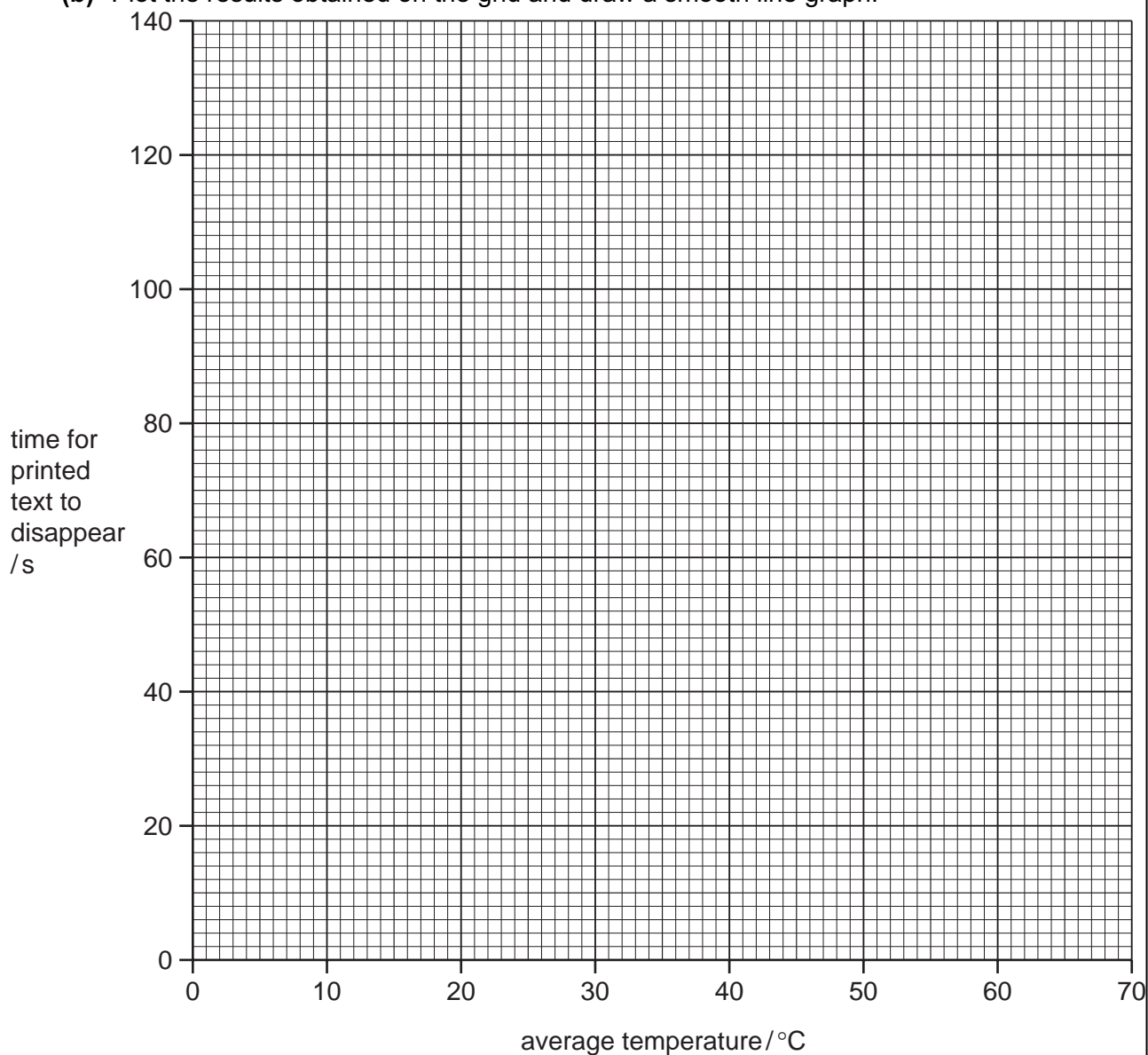
**Table of results**

experiment	thermometer diagram	initial temperature /°C	thermometer diagram	final temperature /°C	average temperature /°C	time for printed text to disappear /s
1						130
2						79
3						55
4						33
5						26

[5]



(b) Plot the results obtained on the grid and draw a smooth line graph.



For  
Examiner's  
Use

[4]

(c) (i) In which experiment was the speed of reaction greatest?

..... [1]

(ii) Explain why the speed was greatest in this experiment.

.....  
 .....  
 ..... [3]

(d) Why was the same volume of sodium thiosulfate solution and the same volume of hydrochloric acid used in each experiment?

.....  
..... [1]

(e) (i) From your graph, deduce the time for the printed text to disappear if *Experiment 2* was to be repeated at 70°C.

Show clearly on the grid how you worked out your answer.

..... [3]

(ii) Sketch on the grid the curve you would expect if all the experiments were repeated using 50 cm<sup>3</sup> of more concentrated sodium thiosulfate solution. [1]

(f) Explain **one** change that could be made to the experimental **method** to obtain more accurate results.

change .....

explanation ..... [2]

[Total: 20]

**BLANK PAGE**

**Question 5 starts on page 12**

- 5 Two solids, **S** and **V**, were analysed. **S** was copper(II) oxide. The tests on the solids, and some of the observations are in the following table. Complete the observations in the table. Do not write any conclusions in the table.

For  
Examiner's  
Use

test	observation
<u>tests on solid S</u>	
(a) Appearance of solid <b>S</b>	black solid
(b) Hydrogen peroxide was added to solid <b>S</b> in a test-tube.  A glowing splint was inserted into the tube.	slow effervescence  splint relit
(c) Dilute sulfuric acid was added to solid <b>S</b> in a test-tube. The mixture was heated to boiling point.  The solution was divided into three equal portions into test-tubes.  (i) To the first portion of the solution, excess sodium hydroxide was added.	blue solution formed    ..... [1]
(ii) To the second portion of the solution, about 1 cm <sup>3</sup> of aqueous ammonia solution was added.  Excess ammonia solution was then added.	..... [2]  ..... [2]
(iii) To the third portion of the solution, dilute hydrochloric acid was added followed by barium chloride solution.	..... [2]

test	observation
<u>tests on solid V</u>	
<b>(d)</b> Appearance of solid <b>V</b>	black solid
<b>(e)</b> Hydrogen peroxide was added to solid <b>V</b> in a test-tube.  A glowing splint was inserted into the tube.	rapid effervescence  splint relit

**(f) (i)** Compare the reactivity of solid **S** and solid **V** with hydrogen peroxide.

..... [1]

**(ii)** Identify the gas given off in test **(e)**.

..... [1]

**(g)** What conclusions can you draw about solid **V**?

.....  
.....  
..... [2]

[Total: 11]

6 Acid base indicators

For  
Examiner's  
Use

Indicators are used to identify acids and bases.  
Indicators can be obtained from berries and other fruits.

(a) Plan an experiment to obtain an aqueous solution of an indicator from some berries.

.....  
.....  
.....  
.....  
.....  
.....  
..... [3]

(b) Plan an experiment to use the indicator solution to show that it is an effective indicator.

.....  
.....  
.....  
.....  
.....  
.....  
..... [3]

[Total: 6]

**BLANK PAGE**

**BLANK PAGE**

---

Permission to reproduce items where third-party owned material protected by copyright is included has been sought and cleared where possible. Every reasonable effort has been made by the publisher (UCLES) to trace copyright holders, but if any items requiring clearance have unwittingly been included, the publisher will be pleased to make amends at the earliest possible opportunity.

University of Cambridge International Examinations is part of the Cambridge Assessment Group. Cambridge Assessment is the brand name of University of Cambridge Local Examinations Syndicate (UCLES), which is itself a department of the University of Cambridge.