



UNIVERSITY OF CAMBRIDGE INTERNATIONAL EXAMINATIONS
International General Certificate of Secondary Education

CANDIDATE
NAME

CENTRE
NUMBER

--	--	--	--	--

CANDIDATE
NUMBER

--	--	--	--



CHEMISTRY

0620/61

Paper 6 Alternative to Practical

October/November 2011

1 hour

Candidates answer on the Question Paper.

No Additional Materials are required.

READ THESE INSTRUCTIONS FIRST

Write your Centre number, candidate number and name on all the work you hand in.

Write in dark blue or black pen.

You may use a pencil for any diagrams, graphs or rough working.

Do not use staples, paper clips, highlighters, glue or correction fluid.

DO NOT WRITE IN ANY BARCODES.

Answer **all** questions.

At the end of the examination, fasten all your work securely together.

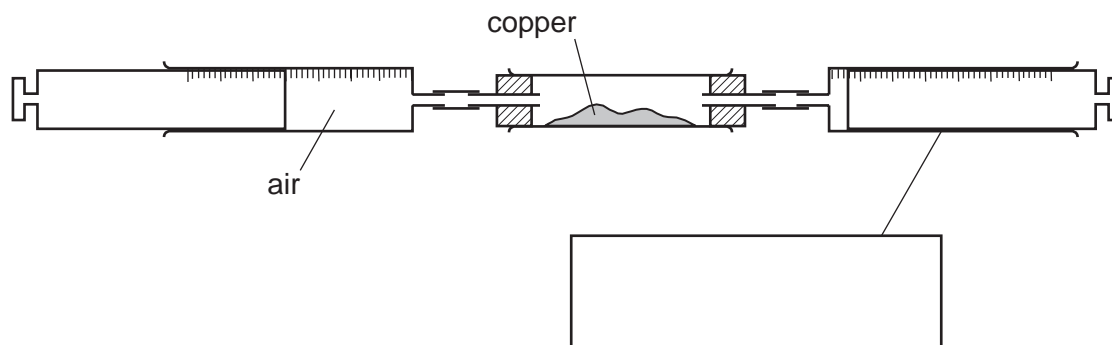
The number of marks is given in brackets [] at the end of each question or part question.

For Examiner's Use	
1	
2	
3	
4	
5	
6	
Total	

This document consists of **13** printed pages and **3** blank pages.



- 1 A student investigated the reaction of air with copper. 100 cm^3 of air was passed continuously over heated copper using the apparatus below. When the volume remained constant, the apparatus was left to cool and the volume of gas was measured.



(a) (i) Complete the box to show the apparatus labelled. [1]

(ii) Indicate on the diagram, with an arrow, where heat is applied. [1]

(b) What should be used to transfer the copper from a bottle to the apparatus?

..... [1]

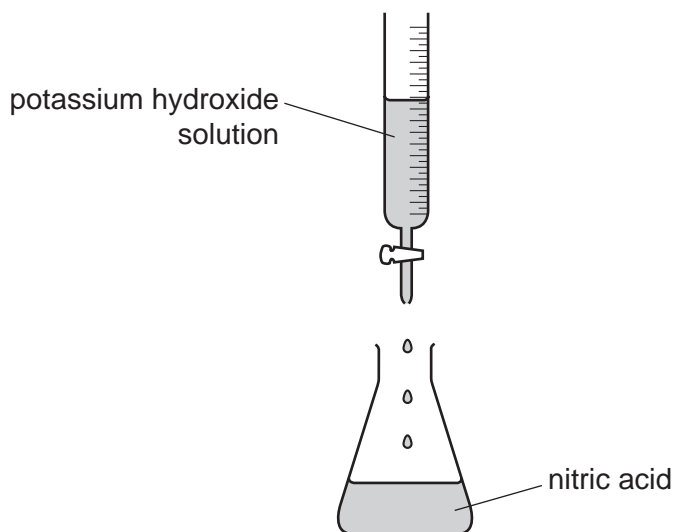
(c) The copper changed colour from brown to [1]

(d) Why was the apparatus left to cool before measuring the final volume of gas?

.....
..... [2]

[Total: 6]

- 2 A student prepared a sample of potassium nitrate by neutralising nitric acid using potassium hydroxide solution. 25.0 cm³ of nitric acid was poured into a conical flask. Potassium hydroxide was added a little at a time from a burette as shown below.

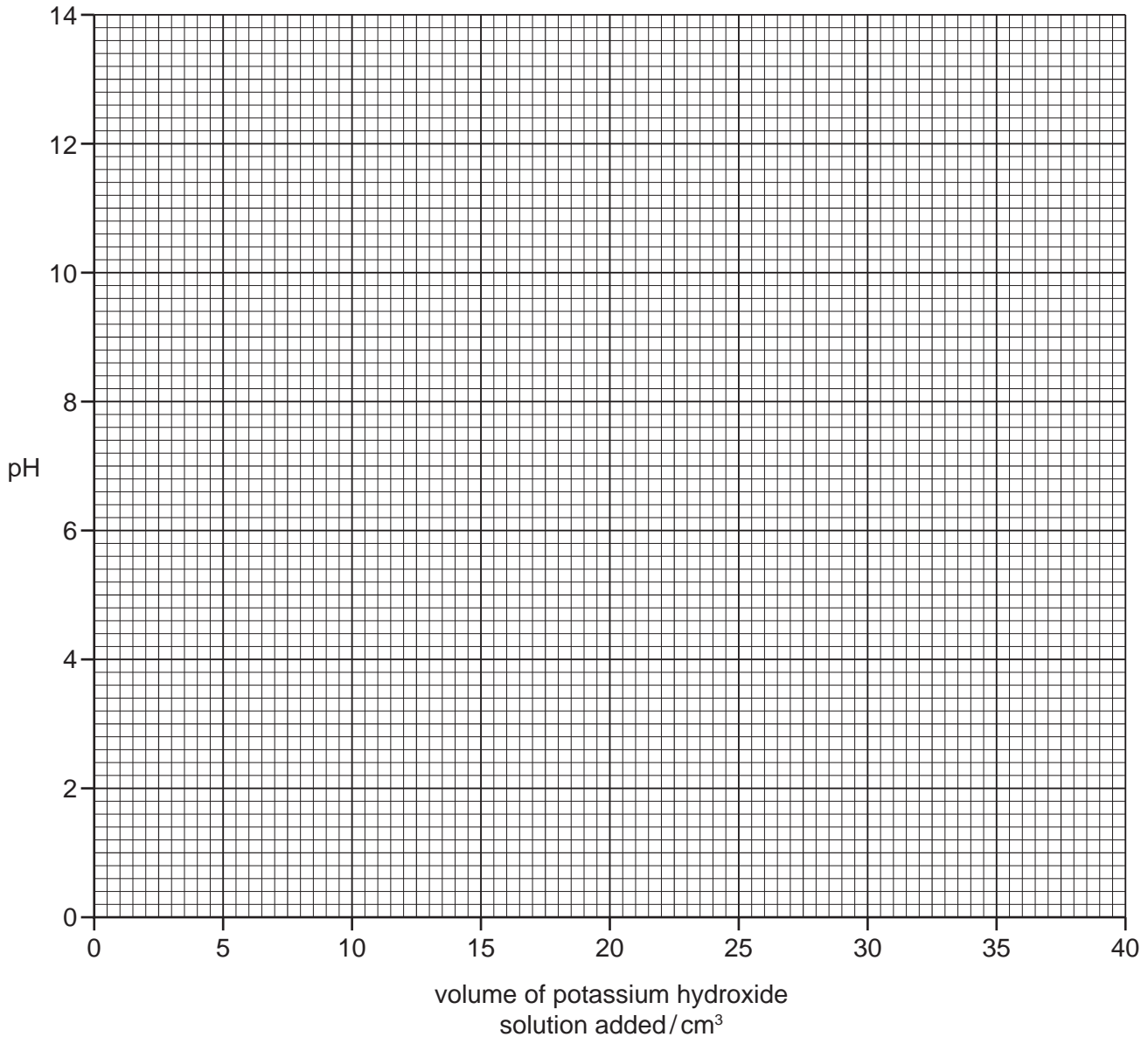


After each addition of potassium hydroxide solution the pH was measured with a pH meter and the values recorded in the table of results.

volume of potassium hydroxide solution added / cm ³	pH value
5.0	1.2
10.0	1.4
15.0	2.6
20.0	2.0
24.0	2.7
24.5	3.0
25.5	11.0
26.0	11.3
30.0	12.0
40.0	13.2

You are going to draw a graph to find the volume of potassium hydroxide solution required to neutralise the 25.0 cm³ of nitric acid.

(a) Plot the results on the grid below and draw a smooth line graph.



[3]

(b) Which point appears to be inaccurate?

..... [1]

(c) (i) **Use your graph** to find the pH of the solution when 35.0 cm³ of potassium hydroxide was added.

..... [1]

(ii) **Use your graph** to find the pH of 25.0 cm³ of nitric acid.

Show clearly **on the grid** how you obtained your answer.

..... [2]

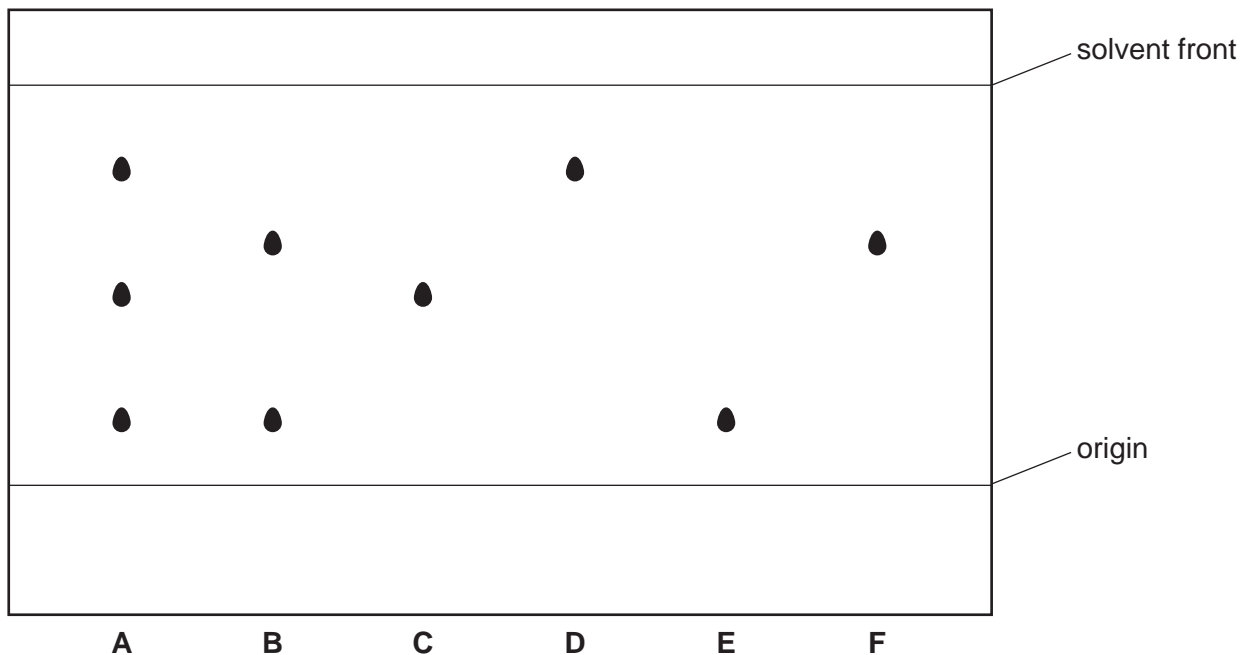
(d) (i) What is the pH of the solution when all of the nitric acid has just been neutralised?
..... [1]

(ii) What volume of potassium hydroxide was required to neutralise 25.0 cm³ of nitric acid?
..... [1]

(e) Describe how the student should modify the experiment to obtain pure crystals of potassium nitrate.
.....
.....
.....
.....
..... [3]

[Total: 12]

- 3 The diagram shows the results of an experiment to separate and identify the colours present in two coloured mixtures, **A** and **B**.
Substances **C**, **D**, **E** and **F** are single colours.



- (a) Name this method of separation.

..... [1]

- (b) Draw a line **on the diagram** to show the level of the solvent at the beginning of the experiment. [1]

- (c) Why should a pencil be used instead of a pen to draw the origin line?

.....
 [1]

- (d) State **one** difference and **one** similarity between the coloured mixtures, **A** and **B**.

difference

.....

similarity

..... [2]

- (e) Which substances are present in mixture **A**?

..... [1]

[Total: 6]

- 4 A student investigated the reaction between aqueous copper(II) sulfate and two different metals, zinc and iron.
Two experiments were carried out.

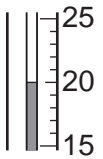
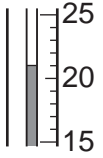
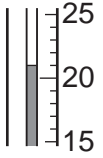
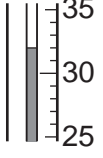
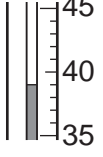
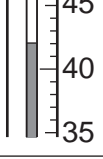
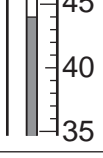
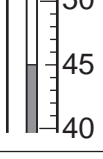
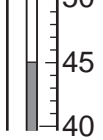
Experiment 1

Using a measuring cylinder, 25 cm³ of aqueous copper(II) sulfate was poured into a polystyrene cup. The temperature of the solution was measured. The timer was started and the temperature was measured every half a minute for one minute.

At 1 minute, 5 g of zinc powder was added to the cup and the mixture stirred with the thermometer. The temperature of the mixture was measured every half minute for an additional three minutes.

(a) Use the thermometer diagrams in the table to record the temperatures.

For
Examiner's
Use

time/min	thermometer diagrams	temperature/°C
0.0		
0.5		
1.0		
1.5		
2.0		
2.5		
3.0		
3.5		
4.0		

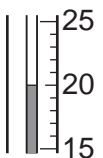
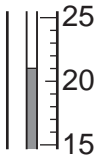
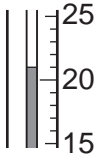
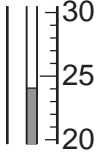
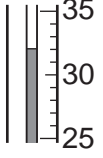
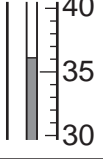
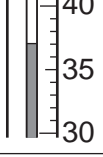
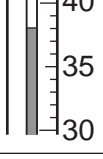
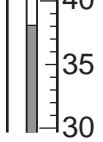
[3]

Experiment 2

Experiment 1 was repeated using 5 g of iron powder instead of the zinc powder.

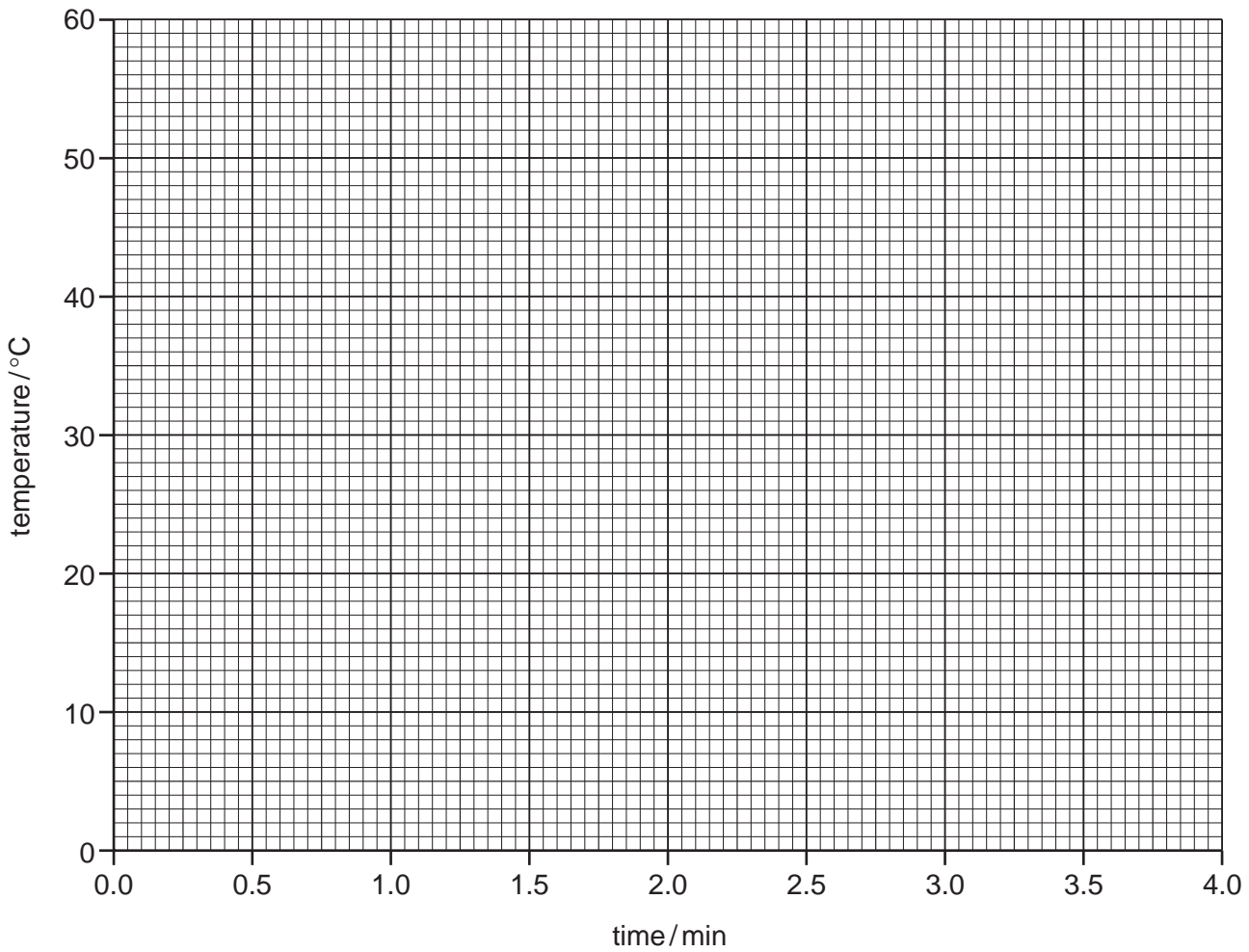
For
Examiner's
Use

(b) Use the thermometer diagrams in the table to record the temperatures.

time / min	thermometer diagrams	temperature / °C
0.0		
0.5		
1.0		
1.5		
2.0		
2.5		
3.0		
3.5		
4.0		

[3]

- (c) Plot the results of both experiments on the grid below. Draw two smooth line graphs. Clearly label your graphs.



[5]

- (d) **From your graph**, work out the temperature of the reaction mixture in Experiment 1 after 1 minute 15 seconds. Show clearly **on the graph** how you worked out your answer.

..... [3]

- (e) What type of chemical process occurs when zinc and iron react with aqueous copper(II) sulfate?

..... [1]

(f) (i) Compare the temperature changes in Experiments 1 and 2.

..... [1]

(ii) Suggest an explanation for the difference in temperature changes.

.....
..... [1]

(g) Explain how the temperature changes would differ in the experiments if 12.5 cm³ of copper(II) sulfate solution were used.

.....
.....
..... [2]

(h) Predict the effect of using lumps of zinc in Experiment 1. Explain your answer.

.....
..... [2]

[Total: 21]

- 5 Three different liquids **P**, **Q** and **R** were analysed.
P was an aqueous solution of sulfuric acid.
 The tests on the liquids and some of the observations are in the following table.
 Complete the observations in the table.

tests	observations	
(a) (i) Appearance of the liquids.	P [1]	
	Q colourless, smell of vinegar	
	R colourless, no smell	
	(ii) The pH of the liquids was tested using Universal Indicator paper.	P [1]
		Q pH5
		R pH7
(b) A piece of magnesium ribbon was added to a little of each liquid. The gas given off by liquid P was tested.	P [2]	
	Q slow effervescence	
	R no reaction	
(c) To a little of liquid P , hydrochloric acid and aqueous barium chloride were added. [2]	
(d) Liquid R was heated to boiling in a test-tube. A thermometer was used to record the constant temperature of the vapour produced.	temperature = 100 °C	

- (e)** What conclusions can you draw about liquid **Q**?

..... [2]

- (f)** Identify liquid **R**.

..... [1]

[Total: 9]

- 6 Seawater contains sodium chloride and other salts.
Plan an experiment to find the mass of salts in 1 dm³ of seawater.
You will be provided with a small bottle of seawater.
You should include details of the method and any apparatus used.
(1 dm³ = 1000 cm³)

.....

.....

.....

.....

.....

.....

.....

.....

.....

..... [6]

[Total: 6]

Permission to reproduce items where third-party owned material protected by copyright is included has been sought and cleared where possible. Every reasonable effort has been made by the publisher (UCLES) to trace copyright holders, but if any items requiring clearance have unwittingly been included the publisher will be pleased to make amends at the earliest possible opportunity.

University of Cambridge International Examinations is part of the Cambridge Assessment Group. Cambridge Assessment is the brand name of University of Cambridge Local Examinations Syndicate (UCLES), which is itself a department of the University of Cambridge.