



UNIVERSITY OF CAMBRIDGE INTERNATIONAL EXAMINATIONS  
International General Certificate of Secondary Education

CANDIDATE  
NAME

CENTRE  
NUMBER

--	--	--	--	--

CANDIDATE  
NUMBER

--	--	--	--



**CHEMISTRY**

**0620/31**

Paper 3 (Extended)

**October/November 2013**

**1 hour 15 minutes**

Candidates answer on the Question Paper.

No Additional Materials are required.

**READ THESE INSTRUCTIONS FIRST**

Write your Centre number, candidate number and name on all the work you hand in.

Write in dark blue or black pen.

You may use a pencil for any diagrams, graphs or rough working.

Do not use staples, paper clips, highlighters, glue or correction fluid.

**DO NOT WRITE IN ANY BARCODES.**

Answer **all** questions.

Electronic calculators may be used.

A copy of the Periodic Table is printed on page 16.

You may lose marks if you do not show your working or if you do not use appropriate units.

At the end of the examination, fasten all your work securely together.

The number of marks is given in brackets [ ] at the end of each question or part question.

This document consists of **14** printed pages and **2** blank pages.



1 For each of the following, name an element which matches the description.

(a) It is used as a fuel in nuclear reactors.

..... [1]

(b) It is the only non-metal which is a good conductor of electricity.

..... [1]

(c) Inert electrodes are made from this metal.

..... [1]

(d) This gaseous element is used to fill balloons in preference to hydrogen.

..... [1]

(e) An element which can form an ion of the type  $X^{3-}$ .

..... [1]

(f) It has the same electron distribution as the calcium ion,  $Ca^{2+}$ .

..... [1]

(g) The element is in Period 5 and Group VI.

..... [1]

[Total: 7]

2 (a) Give **three** differences in physical properties between the Group I metal, potassium, and the transition element, iron.

1. ....

2. ....

3. .... [3]

(b) The following metals are in order of reactivity.

potassium

zinc

copper

For those metals which react with water or steam, name the products of the reaction, otherwise write 'no reaction'.

potassium .....

.....

zinc .....

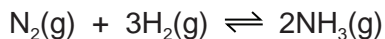
.....

copper .....

..... [5]

[Total: 8]

- 3 Ammonia is manufactured by the Haber process.



The forward reaction is exothermic.

- (a) Describe how the reactants are obtained.

- (i) Nitrogen

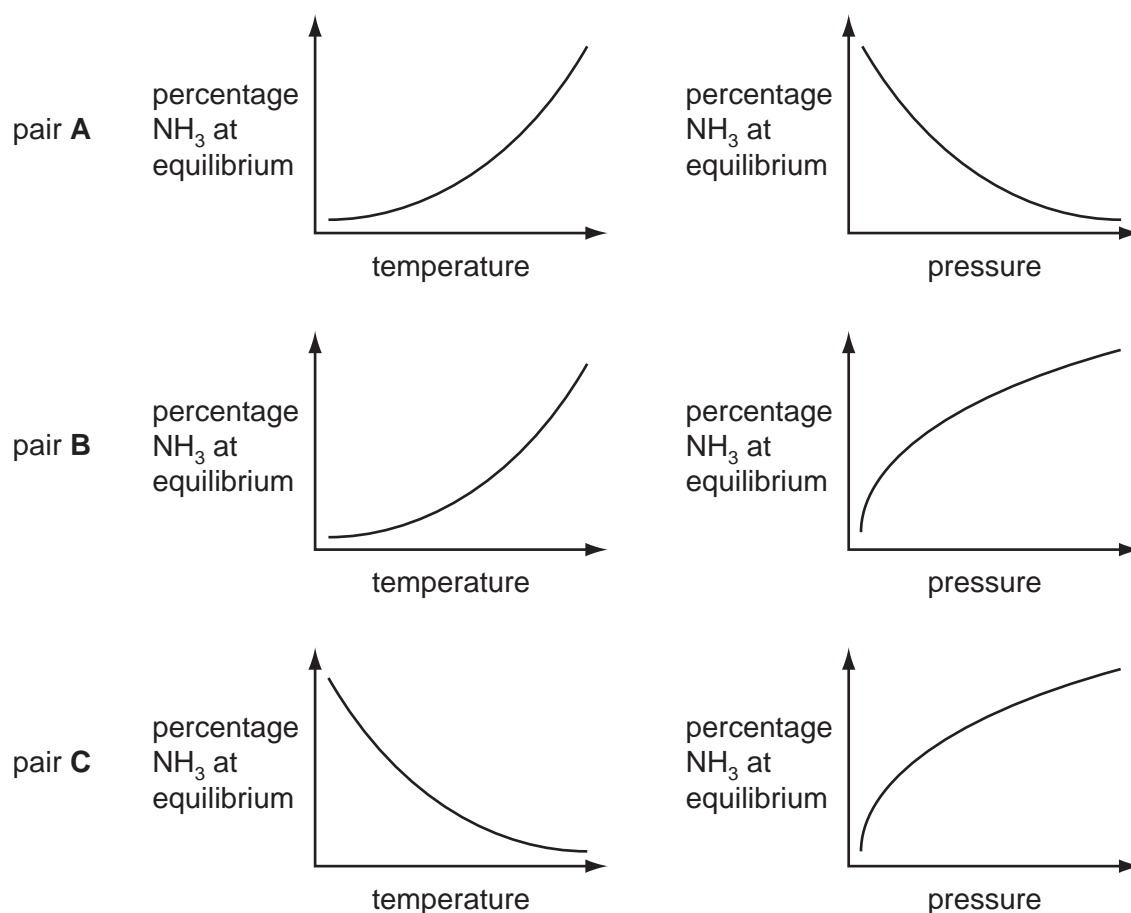
.....  
 ..... [2]

- (ii) Hydrogen

.....  
 .....  
 ..... [3]

- (b) The percentage of ammonia in the equilibrium mixture varies with temperature and pressure.

- (i) Which pair of graphs, **A**, **B** or **C**, shows correctly how the percentage of ammonia at equilibrium varies with temperature and pressure?



The pair with **both graphs correct** is ..... [1]

(ii) Give a full explanation of why the pair of graphs you have chosen in (i) is correct.

.....

.....

.....

.....

.....

.....

.....

.....

..... [6]

(iii) Catalysts do not alter the position of equilibrium. Explain why a catalyst is used in this process.

.....

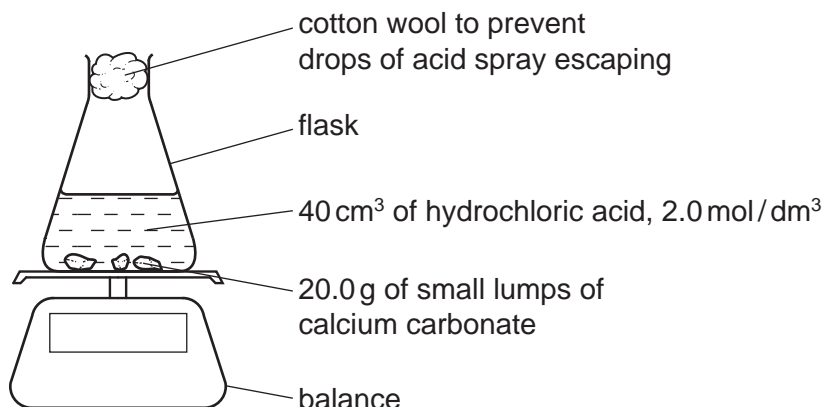
.....

.....

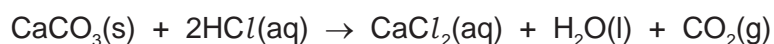
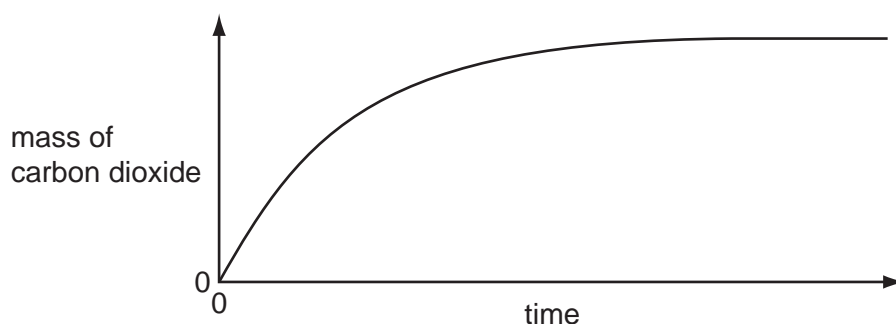
..... [2]

[Total: 14]

- 4 20.0 g of small lumps of calcium carbonate and 40 cm<sup>3</sup> of hydrochloric acid, concentration 2.0 mol/dm<sup>3</sup>, were placed in a flask on a top pan balance. The mass of the flask and contents was recorded every minute.



The mass of carbon dioxide given off was plotted against time.



In all the experiments mentioned in this question, the calcium carbonate was in excess.

- (a) (i) Explain how you could determine the mass of carbon dioxide given off in the first five minutes.

..... [1]

- (ii) Label the graph **F** where the reaction rate is the fastest, **S** where it is slowing down and **0** where the rate is zero. [2]

- (iii) Explain how the shape of the graph shows where the rate is fastest, where it is slowing down and where the rate is zero.

.....  
 .....  
 ..... [2]

- (b) Sketch on the same graph, the line which would have been obtained if 20.0 g of small lumps of calcium carbonate and 80 cm<sup>3</sup> of hydrochloric acid, concentration 1.0 mol/dm<sup>3</sup>, had been used. [2]

(c) Explain in terms of collisions between reacting particles each of the following.

- (i) The reaction rate would be slower if 20.0 g of larger lumps of calcium carbonate and 40 cm<sup>3</sup> of hydrochloric acid, concentration 2.0 mol/dm<sup>3</sup>, were used.

.....  
 .....  
 ..... [2]

- (ii) The reaction rate would be faster if the experiment was carried out at a higher temperature.

.....  
 .....  
 ..... [2]

(d) Calculate the maximum mass of carbon dioxide given off when 20.0 g of small lumps of calcium carbonate react with 40 cm<sup>3</sup> of hydrochloric acid, concentration 2.0 mol/dm<sup>3</sup>.



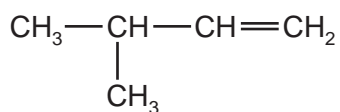
number of moles of HCl used =

mass of carbon dioxide = ..... g [4]

[Total: 15]

- 5 The alkenes are unsaturated hydrocarbons. They form a homologous series, the members of which have the same chemical properties. They undergo addition reactions and are easily oxidised.

(a) The following hydrocarbons are isomers.



- (i) Explain why these two hydrocarbons are isomers.

.....

..... [2]

- (ii) Give the structural formula of another hydrocarbon which is isomeric with the above.

[1]

- (b) Give the structural formula and name of each of the products of the following addition reactions.

- (i) ethene and bromine

structural formula of product

name of product ..... [2]

- (ii) propene and hydrogen

structural formula of product

name of product ..... [2]

- (iii) but-1-ene and water

structural formula of product

name of product ..... [2]



(c) Alkenes can be oxidised to carboxylic acids.

- (i) For example, propene,  $\text{CH}_3-\text{CH}=\text{CH}_2$ , would produce ethanoic acid,  $\text{CH}_3-\text{COOH}$ , and methanoic acid,  $\text{H}-\text{COOH}$ . Deduce the formulae of the alkenes which would form the following carboxylic acids when oxidised.

ethanoic acid and propanoic acid

only ethanoic acid

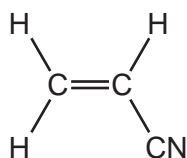
[2]

- (ii) Describe the colour change you would observe when an alkene is oxidised with acidified potassium manganate(VII).

..... [2]

(d) Alkenes polymerise to form addition polymers.

Draw the structural formula of poly(cyanoethene), include at least **two** monomer units. The structural formula of the monomer, cyanoethene, is given below.



[3]

[Total: 16]

6 Lead is an excellent roofing material. It is malleable and resistant to corrosion. Lead rapidly becomes coated with basic lead carbonate which protects it from further corrosion.

(a) Lead has a typical metallic structure which is a lattice of lead ions surrounded by a 'sea' of mobile electrons. This structure is held together by attractive forces called a metallic bond.

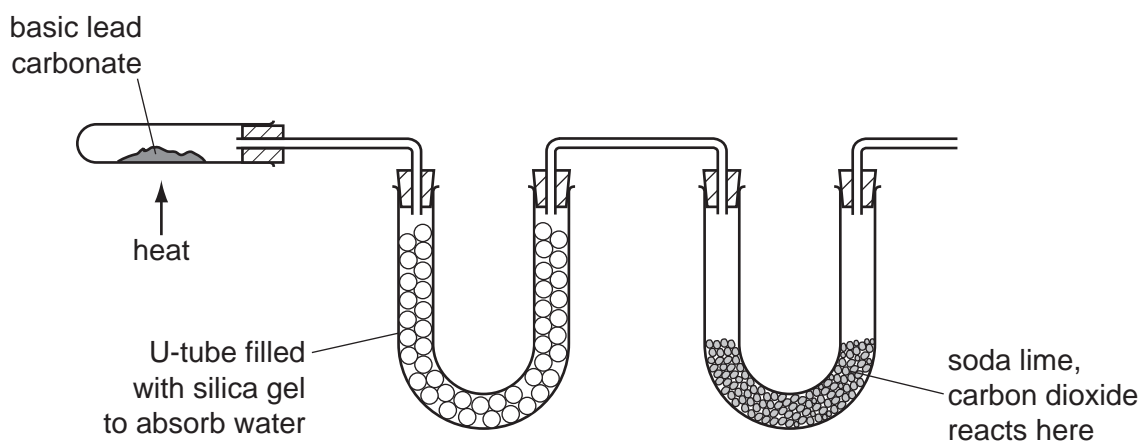
(i) Explain why there are attractive forces in a metallic structure.

.....  
..... [2]

(ii) Explain why a metal, such as lead, is malleable.

.....  
..... [2]

(b) Basic lead(II) carbonate is heated in the apparatus shown below. Water and carbon dioxide are produced.



(i) Silica gel absorbs water. Silica gel often contains anhydrous cobalt(II) chloride. When this absorbs water it changes from blue to pink. Suggest a reason.

..... [1]

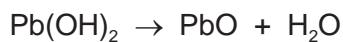
(ii) Soda lime is a mixture of sodium hydroxide and calcium oxide. Why do these two substances react with carbon dioxide?

.....  
..... [2]

(iii) Name **two** substances formed when soda lime reacts with carbon dioxide.

..... [2]

- (c) Basic lead(II) carbonate has a formula of the type  $x\text{PbCO}_3 \cdot y\text{Pb(OH)}_2$  where  $x$  and  $y$  are whole numbers.  
Determine  $x$  and  $y$  from the following information.



When heated, the basic lead(II) carbonate gave 2.112 g of carbon dioxide and 0.432 g of water.

Mass of one mole of  $\text{CO}_2 = 44 \text{ g}$

Mass of one mole of  $\text{H}_2\text{O} = 18 \text{ g}$

Number of moles of  $\text{CO}_2$  formed = ..... [1]

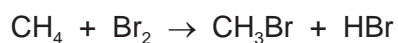
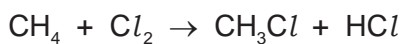
Number of moles of  $\text{H}_2\text{O}$  formed = ..... [1]

$x = \dots\dots\dots$  and  $y = \dots\dots\dots$

Formula of basic lead(II) carbonate is ..... [1]

[Total: 12]

- 7 (a) The following are two examples of substitution reactions. Only the reaction involving chlorine is a photochemical reaction.



- (i) Explain the phrase *substitution reaction*.

.....  
..... [1]

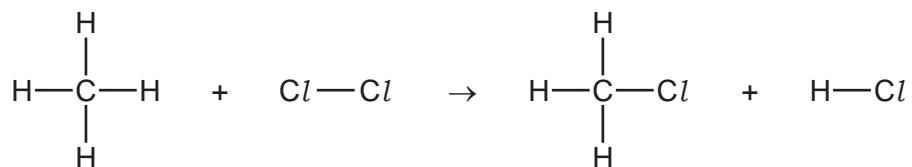
- (ii) How do photochemical reactions differ from other reactions?

.....  
..... [1]

- (b) Bond forming is exothermic, bond breaking is endothermic. Explain the difference between an exothermic reaction and an endothermic reaction.

.....  
..... [2]

- (c) Use the bond energies to show that the following reaction is exothermic. Bond energy is the amount of energy (kJ/mol) which must be supplied to break one mole of the bond.



Bond energies in kJ/mol

Cl-Cl +242

C-Cl +338

C-H +412

H-Cl +431

bonds broken                      energy in kJ/mol

.....

.....

total energy = .....

bonds formed                      energy in kJ/mol

.....

.....

total energy = .....

.....

..... [4]

[Total: 8]





**DATA SHEET**  
**The Periodic Table of the Elements**

		Group																																																																	
I	II	III	IV	V	VI	VII	0																																																												
7 <b>Li</b> Lithium 3	9 <b>Be</b> Beryllium 4	1 <b>H</b> Hydrogen 1	11 <b>B</b> Boron 5	12 <b>C</b> Carbon 6	14 <b>N</b> Nitrogen 7	16 <b>O</b> Oxygen 8	19 <b>F</b> Fluorine 9	20 <b>Ne</b> Neon 10																																																											
23 <b>Na</b> Sodium 11	24 <b>Mg</b> Magnesium 12	13 <b>Al</b> Aluminium 13	28 <b>Si</b> Silicon 14	31 <b>P</b> Phosphorus 15	32 <b>S</b> Sulfur 16	35.5 <b>Cl</b> Chlorine 17	40 <b>Ar</b> Argon 18																																																												
39 <b>K</b> Potassium 19	40 <b>Ca</b> Calcium 20	45 <b>Sc</b> Scandium 21	51 <b>V</b> Vanadium 23	52 <b>Cr</b> Chromium 24	55 <b>Mn</b> Manganese 25	56 <b>Fe</b> Iron 26	59 <b>Co</b> Cobalt 27	59 <b>Ni</b> Nickel 28	64 <b>Cu</b> Copper 29	65 <b>Zn</b> Zinc 30	70 <b>Ga</b> Gallium 31	73 <b>Ge</b> Germanium 32	75 <b>As</b> Arsenic 33	79 <b>Se</b> Selenium 34	80 <b>Br</b> Bromine 35	84 <b>Kr</b> Krypton 36																																																			
85 <b>Rb</b> Rubidium 37	88 <b>Sr</b> Strontium 38	89 <b>Y</b> Yttrium 39	93 <b>Nb</b> Niobium 41	96 <b>Mo</b> Molybdenum 42	98 <b>Tc</b> Technetium 43	101 <b>Ru</b> Ruthenium 44	103 <b>Rh</b> Rhodium 45	106 <b>Pd</b> Palladium 46	108 <b>Ag</b> Silver 47	112 <b>Cd</b> Cadmium 48	115 <b>In</b> Indium 49	119 <b>Sn</b> Tin 50	122 <b>Sb</b> Antimony 51	127 <b>I</b> Iodine 53	131 <b>Xe</b> Xenon 54																																																				
133 <b>Cs</b> Caesium 55	137 <b>Ba</b> Barium 56	139 <b>La</b> Lanthanum 57	181 <b>Ta</b> Tantalum 73	184 <b>W</b> Tungsten 74	186 <b>Re</b> Rhenium 75	190 <b>Os</b> Osmium 76	192 <b>Ir</b> Iridium 77	195 <b>Pt</b> Platinum 78	197 <b>Au</b> Gold 79	201 <b>Hg</b> Mercury 80	204 <b>Tl</b> Thallium 81	207 <b>Pb</b> Lead 82	209 <b>Bi</b> Bismuth 83	210 <b>Po</b> Polonium 84	210 <b>At</b> Astatine 85	222 <b>Rn</b> Radon 86																																																			
87 <b>Fr</b> Francium	226 <b>Ra</b> Radium	227 <b>Ac</b> Actinium																																																																	
		*58-71 Lanthanoid series										†90-103 Actinoid series																																																							
		<table border="1" style="width: 100%; border-collapse: collapse; text-align: center;"> <tr> <td style="width: 5%;">140</td> <td style="width: 5%;">141</td> <td style="width: 5%;">144</td> <td style="width: 5%;">150</td> <td style="width: 5%;">152</td> <td style="width: 5%;">157</td> <td style="width: 5%;">159</td> <td style="width: 5%;">162</td> <td style="width: 5%;">165</td> <td style="width: 5%;">167</td> <td style="width: 5%;">169</td> <td style="width: 5%;">173</td> <td style="width: 5%;">175</td> </tr> <tr> <td><b>Ce</b></td> <td><b>Pr</b></td> <td><b>Nd</b></td> <td><b>Sm</b></td> <td><b>Eu</b></td> <td><b>Gd</b></td> <td><b>Tb</b></td> <td><b>Dy</b></td> <td><b>Ho</b></td> <td><b>Er</b></td> <td><b>Tm</b></td> <td><b>Yb</b></td> <td><b>Lu</b></td> </tr> <tr> <td>Cerium</td> <td>Praseodymium</td> <td>Neodymium</td> <td>Samarium</td> <td>Europlum</td> <td>Gadolinium</td> <td>Terbium</td> <td>Disprosium</td> <td>Holmium</td> <td>Erbium</td> <td>Thulium</td> <td>Ytterbium</td> <td>Lutetium</td> </tr> <tr> <td>58</td> <td>59</td> <td>60</td> <td>62</td> <td>63</td> <td>64</td> <td>65</td> <td>66</td> <td>67</td> <td>68</td> <td>69</td> <td>70</td> <td>71</td> </tr> </table>										140	141	144	150	152	157	159	162	165	167	169	173	175	<b>Ce</b>	<b>Pr</b>	<b>Nd</b>	<b>Sm</b>	<b>Eu</b>	<b>Gd</b>	<b>Tb</b>	<b>Dy</b>	<b>Ho</b>	<b>Er</b>	<b>Tm</b>	<b>Yb</b>	<b>Lu</b>	Cerium	Praseodymium	Neodymium	Samarium	Europlum	Gadolinium	Terbium	Disprosium	Holmium	Erbium	Thulium	Ytterbium	Lutetium	58	59	60	62	63	64	65	66	67	68	69	70	71				
140	141	144	150	152	157	159	162	165	167	169	173	175																																																							
<b>Ce</b>	<b>Pr</b>	<b>Nd</b>	<b>Sm</b>	<b>Eu</b>	<b>Gd</b>	<b>Tb</b>	<b>Dy</b>	<b>Ho</b>	<b>Er</b>	<b>Tm</b>	<b>Yb</b>	<b>Lu</b>																																																							
Cerium	Praseodymium	Neodymium	Samarium	Europlum	Gadolinium	Terbium	Disprosium	Holmium	Erbium	Thulium	Ytterbium	Lutetium																																																							
58	59	60	62	63	64	65	66	67	68	69	70	71																																																							
		<table border="1" style="width: 100%; border-collapse: collapse; text-align: center;"> <tr> <td style="width: 5%;">232</td> <td style="width: 5%;">238</td> <td style="width: 5%;">238</td> <td style="width: 5%;">238</td> <td style="width: 5%;">238</td> <td style="width: 5%;">238</td> <td style="width: 5%;">238</td> <td style="width: 5%;">238</td> <td style="width: 5%;">238</td> <td style="width: 5%;">238</td> <td style="width: 5%;">238</td> <td style="width: 5%;">238</td> <td style="width: 5%;">238</td> </tr> <tr> <td><b>Th</b></td> <td><b>Pa</b></td> <td><b>U</b></td> <td><b>Np</b></td> <td><b>Pu</b></td> <td><b>Am</b></td> <td><b>Cm</b></td> <td><b>Cf</b></td> <td><b>Es</b></td> <td><b>Fm</b></td> <td><b>Md</b></td> <td><b>No</b></td> <td><b>Lr</b></td> </tr> <tr> <td>Thorium</td> <td>Protactinium</td> <td>Uranium</td> <td>Neptunium</td> <td>Plutonium</td> <td>Americium</td> <td>Curium</td> <td>Californium</td> <td>Einsteinium</td> <td>Fermium</td> <td>Mendelevium</td> <td>Nobelium</td> <td>Lawrencium</td> </tr> <tr> <td>90</td> <td>91</td> <td>92</td> <td>93</td> <td>94</td> <td>95</td> <td>96</td> <td>98</td> <td>99</td> <td>100</td> <td>101</td> <td>102</td> <td>103</td> </tr> </table>										232	238	238	238	238	238	238	238	238	238	238	238	238	<b>Th</b>	<b>Pa</b>	<b>U</b>	<b>Np</b>	<b>Pu</b>	<b>Am</b>	<b>Cm</b>	<b>Cf</b>	<b>Es</b>	<b>Fm</b>	<b>Md</b>	<b>No</b>	<b>Lr</b>	Thorium	Protactinium	Uranium	Neptunium	Plutonium	Americium	Curium	Californium	Einsteinium	Fermium	Mendelevium	Nobelium	Lawrencium	90	91	92	93	94	95	96	98	99	100	101	102	103				
232	238	238	238	238	238	238	238	238	238	238	238	238																																																							
<b>Th</b>	<b>Pa</b>	<b>U</b>	<b>Np</b>	<b>Pu</b>	<b>Am</b>	<b>Cm</b>	<b>Cf</b>	<b>Es</b>	<b>Fm</b>	<b>Md</b>	<b>No</b>	<b>Lr</b>																																																							
Thorium	Protactinium	Uranium	Neptunium	Plutonium	Americium	Curium	Californium	Einsteinium	Fermium	Mendelevium	Nobelium	Lawrencium																																																							
90	91	92	93	94	95	96	98	99	100	101	102	103																																																							
		<table border="1" style="width: 100%; border-collapse: collapse; text-align: center;"> <tr> <td style="width: 5%;"><b>a</b></td> <td style="width: 5%;"><b>X</b></td> <td style="width: 5%;"><b>b</b></td> </tr> <tr> <td>Key</td> <td></td> <td></td> </tr> </table>										<b>a</b>	<b>X</b>	<b>b</b>	Key																																																				
<b>a</b>	<b>X</b>	<b>b</b>																																																																	
Key																																																																			
		a = relative atomic mass																																																																	
		X = atomic symbol																																																																	
		b = proton (atomic) number																																																																	

The volume of one mole of any gas is 24 dm<sup>3</sup> at room temperature and pressure (r.t.p.).

Permission to reproduce items where third-party owned material protected by copyright is included has been sought and cleared where possible. Every reasonable effort has been made by the publisher (UCLES) to trace copyright holders, but if any items requiring clearance have unwittingly been included the publisher will be pleased to make amends at the earliest possible opportunity.

University of Cambridge International Examinations is part of the Cambridge Assessment Group. Cambridge Assessment is the brand name of University of Cambridge Local Examinations Syndicate (UCLES), which is itself a department of the University of Cambridge.